

Name : _____

Area of a Rectangle

T1L2S5


Find the area of each rectangle.

1)



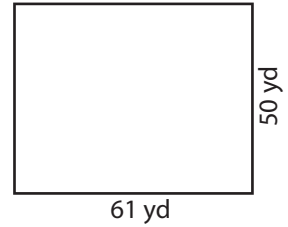
Area =

2)

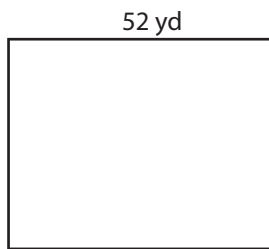


Area =

3)



4)



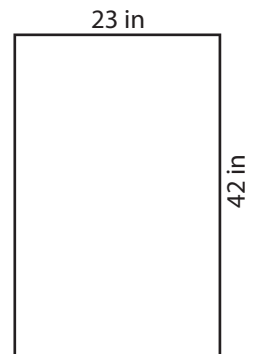
Area =

Gain complete access to the largest collection of worksheets in all subjects!

Members, please log in to download this worksheet.


Not a member? Please sign up to gain complete access.

www.mathworksheets4kids.com




Area =

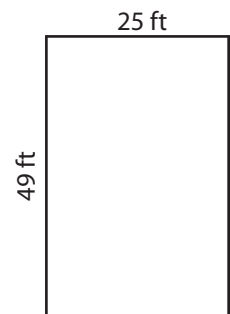
7)



Area =



Area =



Area =

Name : _____

Answer key

Area of a Rectangle

T1L2S5


Find the area of each rectangle.

1)

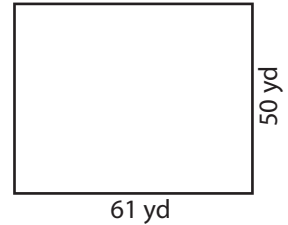


Area = **2,079 ft²**

2)

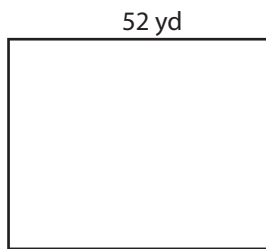


3)



Area = **3,050 yd²**

4)



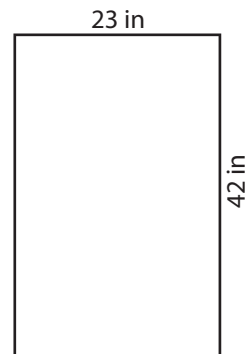
Area = **2,132 yd²**

Gain complete access to the largest collection of worksheets in all subjects!

Members, please log in to download this worksheet.


Not a member? Please sign up to gain complete access.

www.mathworksheets4kids.com




Area = **966 in²**

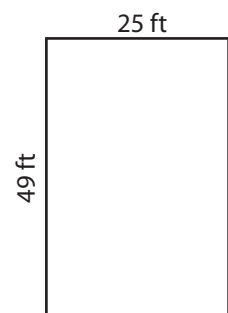
7)



Area = **968 in²**



Area = **450 yd²**



Area = **1,225 ft²**