

Name : _____

Area of a Rectangle

T2L1S4

A) Find the area of each rectangle for the given measurements.

1) width = 11 ft, length = 17 ft

Area = _____

2) length = 8 in, width = 3 in

Area = _____

3) width = 5 in, length = 18 in

4) length = 16 yd, width = 6 yd

Area = _____


B) Find the area of each

5)



Area = _____

7)



Area = _____

PREVIEW

Gain complete access to the largest collection of worksheets in all subjects!

Members, please log in to download this worksheet.

Not a member? Please sign up to gain complete access.

www.mathworksheets4kids.com

8 in

Area = _____

9) What is the area of the rectangle UVWX, if UV = 16 yards and VW = 12 yards?

Name : _____

Answer key

T2L1S4

Area of a Rectangle

A) Find the area of each rectangle for the given measurements.

1) width = 11 ft, length = 17 ft

Area = 187 ft²

2) length = 8 in, width = 3 in

Area = 24 in²

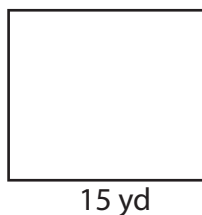
3) width = 5 in, length = 18 in

4) length = 16 yd, width = 6 yd

Area = 90 i²


B) Find the area of each

5)




Area = 180 y²

7)



Area = 99 ft²



Area = 136 in²

9) What is the area of the rectangle UVWX, if UV = 16 yards and VW = 12 yards?

192 square yards

PREVIEW

Gain complete access to the largest collection of worksheets in all subjects!

Members, please log in to download this worksheet.

Not a member? Please sign up to gain complete access.

www.mathworksheets4kids.com