

Name : _____

Area of a Rectangle

T2L1S5

A) Find the area of each rectangle for the given measurements.

1) length = 7 yd, width = 5 yd

Area = _____

2) width = 9 ft, length = 19 ft

Area = _____


3) width = 11 ft, length = 13 ft

4) length = 10 in, width = 1 in

Area = _____

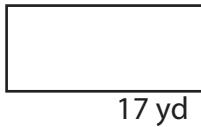
B) Find the area of each

5)



Area = _____

7)



Area = _____

PREVIEW

Gain complete access to the largest collection of worksheets in all subjects!

Members, please log in to download this worksheet.

Not a member? Please sign up to gain complete access.

www.mathworksheets4kids.com

3 yd

9 ft

Area = _____

9) The width and length of a rectangle are 12 inches and 14 inches respectively. Determine the area of the rectangle.

Name : _____

Answer key

T2L1S5

Area of a Rectangle

A) Find the area of each rectangle for the given measurements.

1) length = 7 yd, width = 5 yd

Area = 35 yd²

2) width = 9 ft, length = 19 ft

Area = 171 ft²

3) width = 11 ft, length = 13 ft

Area = 143

4) length = 10 in, width = 1 in


B) Find the area of each

5)



Area = 104

7)



Area = 85 yd²

PREVIEW

Gain complete access to the largest collection of worksheets in all subjects!

Members, please log in to download this worksheet.

Not a member? Please sign up to gain complete access.

www.mathworksheets4kids.com

Dimensions: 9 ft (width), 3 yd (height)

Area = 144 ft²

9) The width and length of a rectangle are 12 inches and 14 inches respectively. Determine the area of the rectangle.

168 square inches