

Name : _____

Area of a Rectangle

T2L2S1

A) Find the area of each rectangle for the given measurements.

1) width = 43 yd, length = 64 yd

Area = _____

2) length = 17 in, width = 11 in

Area = _____

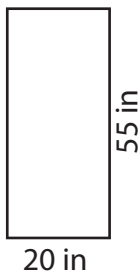
3) length = 87 ft, width = 12 ft

4) width = 29 yd, length = 45 yd

Area = _____

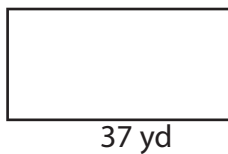
B) Find the area of each

5)



Area = _____

7)



Area = _____

PREVIEW

Gain complete access to the largest collection of worksheets in all subjects!

Members, please log in to download this worksheet.

Not a member? Please sign up to gain complete access.

www.mathworksheets4kids.com

30 ft

46 in

Area = _____

9) What is the area of the rectangle EFGH, if EF = 72 feet and FG = 54 feet?

Name : _____

Answer key

T2L2S1

Area of a Rectangle

A) Find the area of each rectangle for the given measurements.

1) width = 43 yd, length = 64 yd

Area = 2,752 yd²

2) length = 17 in, width = 11 in

Area = 187 in²

3) length = 87 ft, width = 12 ft

Area = 1,044

4) width = 29 yd, length = 45 yd

d²

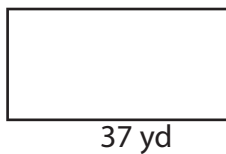
B) Find the area of each

5)



Area = 1,100

7)



Area = 629 yd²

PREVIEW

Gain complete access to the largest collection of worksheets in all subjects!

Members, please log in to download this worksheet.

Not a member? Please sign up to gain complete access.

www.mathworksheets4kids.com

30 ft

46 in

t²

Area = 3,358 in²

9) What is the area of the rectangle EFGH, if EF = 72 feet and FG = 54 feet?

3,888 square feet