

Name : \_\_\_\_\_

## Area of a Rectangle

T2L2S2

A) Find the area of each rectangle for the given measurements.

1) length = 57 in, width = 25 in

Area = \_\_\_\_\_

2) width = 10 ft, length = 46 ft

Area = \_\_\_\_\_


3) width = 12 yd, length = 35 yd

4) length = 73 in, width = 39 in

Area = \_\_\_\_\_

B) Find the area of each


5)



67 ft

Area = \_\_\_\_\_

7)



12 in

Area = \_\_\_\_\_

**PREVIEW**

Gain complete access to the largest collection of worksheets in all subjects!

Members, please log in to download this worksheet.

Not a member? Please sign up to gain complete access.

[www.mathworksheets4kids.com](http://www.mathworksheets4kids.com)

30 ft

Area = \_\_\_\_\_

9) PQRS is a rectangle with PQ = 45 yards and QR = 60 yards. Find the area.

\_\_\_\_\_

Name : \_\_\_\_\_

## Answer key

T2L2S2

### Area of a Rectangle

A) Find the area of each rectangle for the given measurements.

1) length = 57 in, width = 25 in

Area = 1,425 in<sup>2</sup>

2) width = 10 ft, length = 46 ft

Area = 460 ft<sup>2</sup>


3) width = 12 yd, length = 35 yd

4) length = 73 in, width = 39 in

Area = 420 yd<sup>2</sup>

B) Find the area of each

5)



Area = 4,288 ft<sup>2</sup>

7)



Area = 444 in<sup>2</sup>

Area = 1,410 ft<sup>2</sup>

9) PQRS is a rectangle with PQ = 45 yards and QR = 60 yards. Find the area.

2,700 square yards

**PREVIEW**

Gain complete access to the largest collection of worksheets in all subjects!

Members, please log in to download this worksheet.

Not a member? Please sign up to gain complete access.

[www.mathworksheets4kids.com](http://www.mathworksheets4kids.com)