

Name : _____

Area of a Rectangle

T2L2S3

A) Find the area of each rectangle for the given measurements.

1) length = 68 ft, width = 14 ft

Area = _____

2) width = 34 in, length = 58 in

Area = _____

3) length = 25 in, width = 24 in

4) width = 18 yd, length = 32 yd

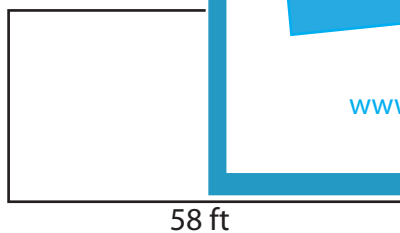
B) Find the area of each

5)



Area = _____

7)



Area = _____

PREVIEW

Gain complete access to the largest collection of worksheets in all subjects!

Members, please log in to download this worksheet.

Not a member? Please sign up to gain complete access.

www.mathworksheets4kids.com



Area = _____

9) The length and width of a rectangle are 69 yards and 22 yards respectively. Determine the area of the rectangle.

Name : _____

Answer key

T2L2S3

Area of a Rectangle

A) Find the area of each rectangle for the given measurements.

1) length = 68 ft, width = 14 ft

Area = 952 ft²

2) width = 34 in, length = 58 in

Area = 1,972 in²

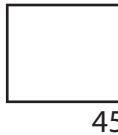
3) length = 25 in, width = 24 in

4) width = 18 yd, length = 32 yd

Area = 600


B) Find the area of each

5)



Area = 495

7)



Area = 1,450 ft²

PREVIEW

Gain complete access to the largest collection of worksheets in all subjects!

Members, please log in to download this worksheet.

Not a member? Please sign up to gain complete access.

www.mathworksheets4kids.com

10 in

Area = 310 in²

9) The length and width of a rectangle are 69 yards and 22 yards respectively. Determine the area of the rectangle.

1,518 square yards