

Name : _____

Area of a Rectangle

T2L2S5

A) Find the area of each rectangle for the given measurements.

1) width = 15 ft, length = 28 ft

Area = _____

2) length = 62 yd, width = 58 yd

Area = _____

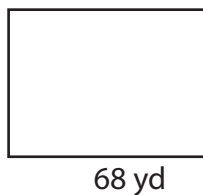
3) width = 21 in, length = 71 in

4) length = 46 ft, width = 22 ft

Area = _____


B) Find the area of each

5)



Area = _____

7)



Area = _____

PREVIEW

Gain complete access to the largest collection of worksheets in all subjects!

Members, please log in to download this worksheet.

Not a member? Please sign up to gain complete access.

www.mathworksheets4kids.com

Area = _____

9) The width and length of a rectangle are 36 inches and 48 inches respectively. Determine the area of the rectangle.

Name : _____

Answer key

T2L2S5

Area of a Rectangle

A) Find the area of each rectangle for the given measurements.

1) width = 15 ft, length = 28 ft

Area = 420 ft²

2) length = 62 yd, width = 58 yd

Area = 3,596 yd²

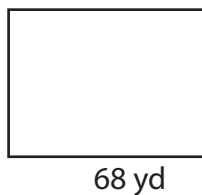
3) width = 21 in, length = 71 in

Area = 1,491

4) length = 46 ft, width = 22 ft


B) Find the area of each

5)



Area = 2,652

7)



Area = 209 ft²

PREVIEW

Gain complete access to the largest collection of worksheets in all subjects!

Members, please log in to download this worksheet.

Not a member? Please sign up to gain complete access.

www.mathworksheets4kids.com

Area = 1,080 yd²

9) The width and length of a rectangle are 36 inches and 48 inches respectively. Determine the area of the rectangle.

1,728 square inches