

Name : _____

Area of a Rectangle

Sheet 2

A) Find the missing side length of each rectangle.

1) Area = 99 ft^2 , length = 11 ft

width = _____

2) Area = 112 in^2 , width = 8 in

length = _____

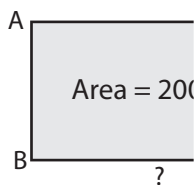
3) Area = 180 in^2 , width = 12 in

length = _____

4) Area = 50 yd^2 , length = 10 yd

B) Find the missing side

5)



7)



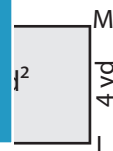
PREVIEW

Gain complete access to the largest collection of worksheets in all subjects!

Members, please log in to download this worksheet.

Not a member? Please sign up to gain complete access.

www.mathworksheets4kids.com



9) The width of a rectangle is 3 feet. If the area of the rectangle is 12 square feet, find the length.

Name : _____

Answer key

Sheet 2

Area of a Rectangle

A) Find the missing side length of each rectangle.

1) Area = 99 ft^2 , length = 11 ft

width = 9 ft

2) Area = 112 in^2 , width = 8 in

length = 14 in

3) Area = 180 in^2 , width = 12 in

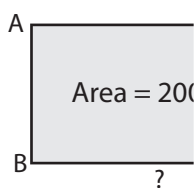
length = 15 in

4) Area = 50 yd^2 , length = 10 yd

5 yd

B) Find the missing side

5)



BC = 20 yd

7)



EF = 6 ft

9) The width of a rectangle is 3 feet. If the area of the rectangle is 12 square feet, find the length.

4 feet

PREVIEW

Gain complete access to the largest collection of worksheets in all subjects!

Members, please log in to download this worksheet.

Not a member? Please sign up to gain complete access.

www.mathworksheets4kids.com

