

Name : _____

Area of a Rectangle

Sheet 3

A) Find the missing side length of each rectangle.

1) Area = 18 yd^2 , width = 2 yd

length = _____

2) Area = 126 ft^2 , length = 18 ft

width = _____

3) Area = 35 ft^2 , length = 7 ft

width = _____

4) Area = 117 in^2 , width = 9 in

B) Find the missing side

5)



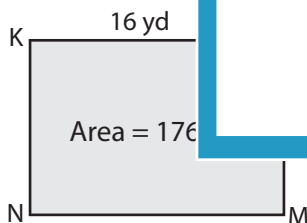
PREVIEW
Gain complete access to the largest
collection of worksheets in all subjects!

Members, please
log in to
download this
worksheet.

Not a member?
Please sign up to
gain complete
access.

www.mathworksheets4kids.com

7)



9) The area of a rectangle is 30 square yards. Determine the width of the rectangle, if the length is 10 yards.

Name : _____

Answer key

Area of a Rectangle

Sheet 3

A) Find the missing side length of each rectangle.

1) Area = 18 yd^2 , width = 2 yd

length = 9 yd

2) Area = 126 ft^2 , length = 18 ft

width = 7 ft

3) Area = 35 ft^2 , length = 7 ft

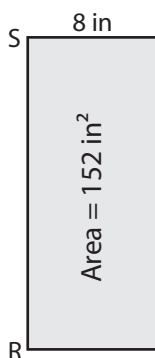
width = 5 ft

4) Area = 117 in^2 , width = 9 in

length = 13 in

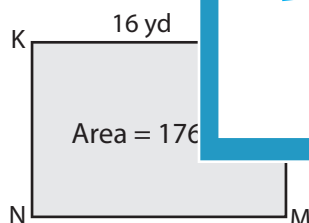
B) Find the missing side

5)



TU = 19 in

7)



LM = 11 yd



length = 3 ft



EH = 4 in

9) The area of a rectangle is 30 square yards. Determine the width of the rectangle, if the length is 10 yards.

3 yards

PREVIEW

Gain complete access to the largest collection of worksheets in all subjects!

Members, please log in to download this worksheet.

Not a member? Please sign up to gain complete access.

www.mathworksheets4kids.com