

Name : _____

Area of a Rectangle

Sheet 4

A) Find the missing side length of each rectangle.

1) Area = 96 in^2 , length = 12 in

width = _____

2) Area = 42 yd^2 , width = 6 yd

length = _____

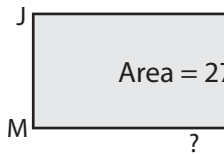
3) Area = 20 yd^2 , width = 4 yd

length = _____

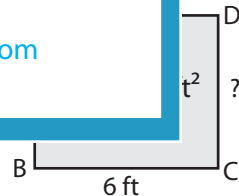
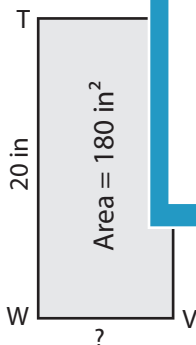
4) Area = 110 ft^2 , length = 11 ft

B) Find the missing side

5)



7)



PREVIEW

Gain complete access to the largest collection of worksheets in all subjects!

Members, please log in to download this worksheet.

Not a member? Please sign up to gain complete access.

www.mathworksheets4kids.com

9) The area of a rectangle is 143 square inches. If the width of the rectangle is 11 inches, find the length.

Name : _____

Answer key

Sheet 4

Area of a Rectangle

A) Find the missing side length of each rectangle.

1) Area = 96 in^2 , length = 12 in

width = 8 in

2) Area = 42 yd^2 , width = 6 yd

length = 7 yd

3) Area = 20 yd^2 , width = 4 yd

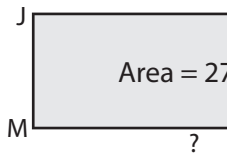
length = 5 yd

4) Area = 110 ft^2 , length = 11 ft

width = 10 ft

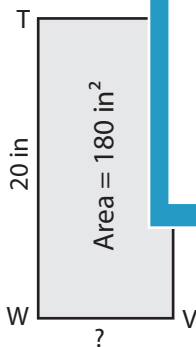
B) Find the missing side

5)

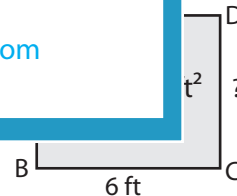


LM = 9 ft

7)



VW = 9 in



CD = 5 ft

9) The area of a rectangle is 143 square inches. If the width of the rectangle is 11 inches, find the length.

13 inches

PREVIEW

Gain complete access to the largest collection of worksheets in all subjects!

Members, please log in to download this worksheet.

Not a member? Please sign up to gain complete access.

www.mathworksheets4kids.com