

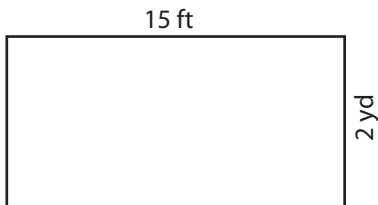
Name : _____

T1S1

Area of a Rectangle

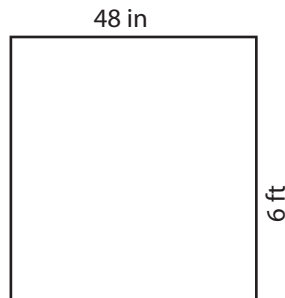
Find the area of each rectangle.

1)



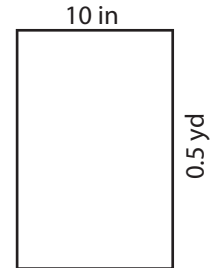
Area = _____ y

2)

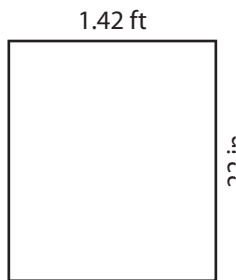


= _____ in²

3)



4)




Area = _____ in

Gain complete access to the largest collection of worksheets in all subjects!

Members, please log in to download this worksheet.


Not a member? Please sign up to gain complete access.

www.mathworksheets4kids.com




= _____ ft²

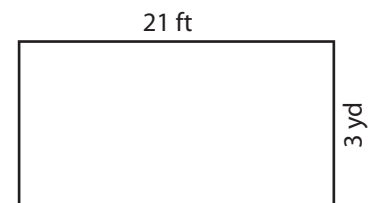
7)



Area = _____ ft²



Area = _____ yd²



Area = _____ yd²

Name : _____

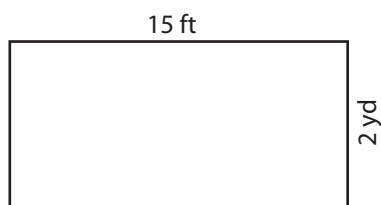
Answer key

Area of a Rectangle

T1S1

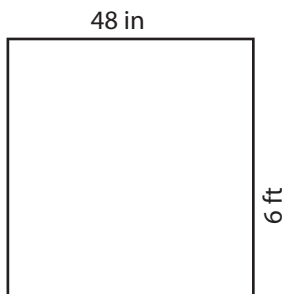
Find the area of each rectangle.

1)



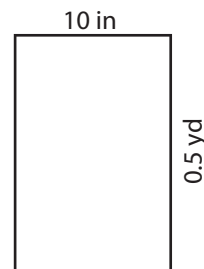
Area = 10 y

2)

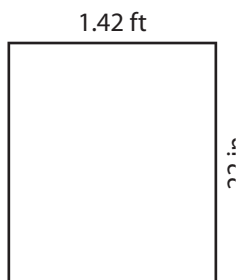


= 180 in²

3)



4)




Area = 374.88 in

Gain complete access to the largest collection of worksheets in all subjects!

Members, please log in to download this worksheet.

Not a member? Please sign up to gain complete access.

www.mathworksheets4kids.com



= 72 ft²

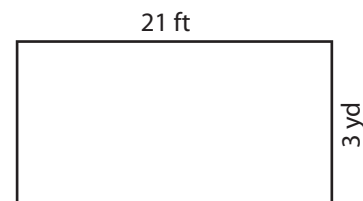
7)



Area = 96 ft²



Area = 63 yd²



Area = 21 yd²