

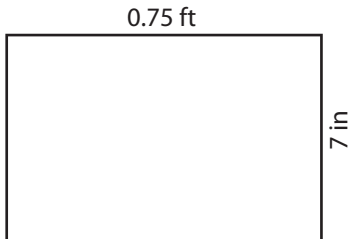
Name : _____

T1S2

Area of a Rectangle


Find the area of each rectangle.

1)

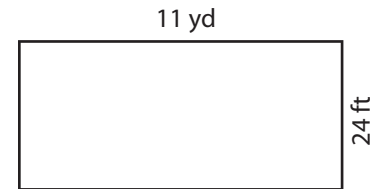


Area = _____ in

2)

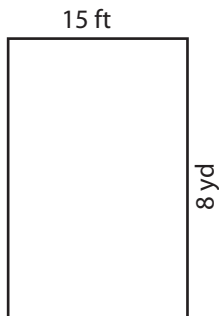


3)



= _____ yd²

4)



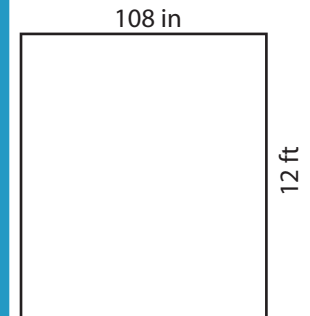
Area = _____ y

Gain complete access to the largest collection of worksheets in all subjects!

Members, please log in to download this worksheet.

Not a member? Please sign up to gain complete access.

www.mathworksheets4kids.com

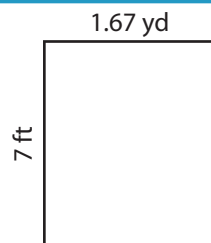


= _____ ft²

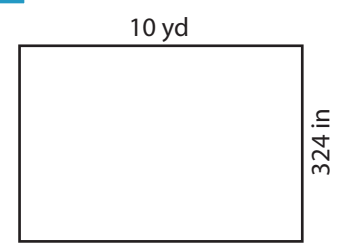
7)



Area = _____ in²



Area = _____ ft²



Area = _____ yd²

Name : _____

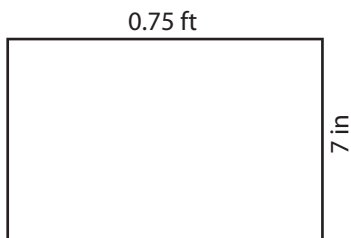
Answer key

T1S2

Area of a Rectangle

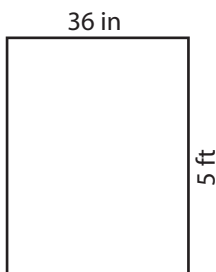
Find the area of each rectangle.

1)

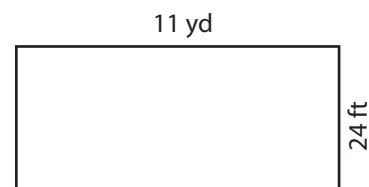


Area = 63 in

2)

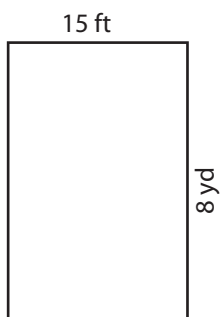


3)



= 88 yd²

4)



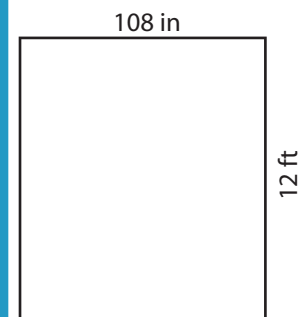
Area = 40 y

Gain complete access to the largest collection of worksheets in all subjects!

Members, please log in to download this worksheet.

Not a member? Please sign up to gain complete access.

www.mathworksheets4kids.com

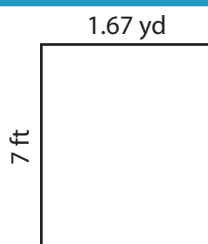


= 108 ft²

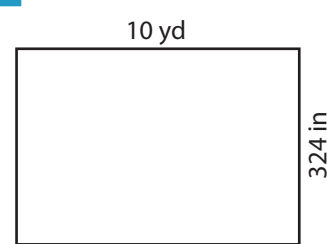
7)



Area = 117 in²



Area = 35.07 ft²



Area = 90 yd²