

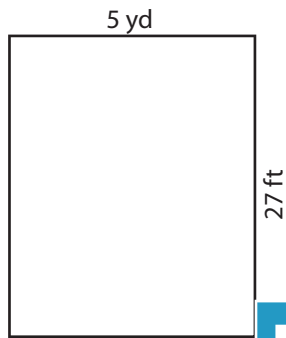
Name : _____

T1S3

Area of a Rectangle

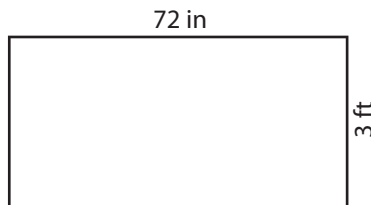
Find the area of each rectangle.

1)



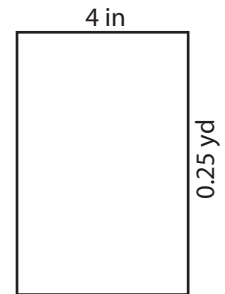
Area = _____ y

2)

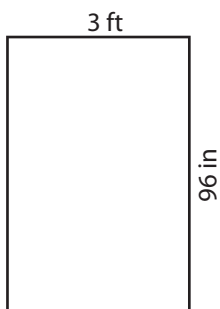


= _____ in²

3)



4)



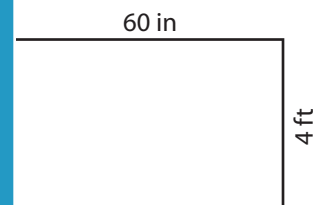
Area = _____ in

Gain complete access to the largest collection of worksheets in all subjects!

Members, please log in to download this worksheet.


Not a member? Please sign up to gain complete access.

www.mathworksheets4kids.com

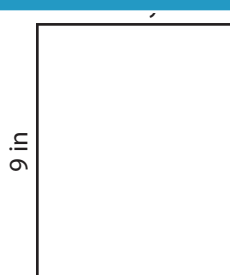


= _____ ft²

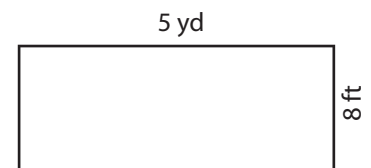
7)



Area = _____ yd²



Area = _____ in²



Area = _____ ft²

Name : _____

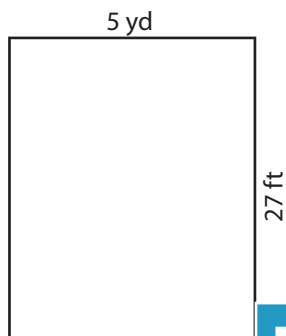
Answer key

T1S3

Area of a Rectangle

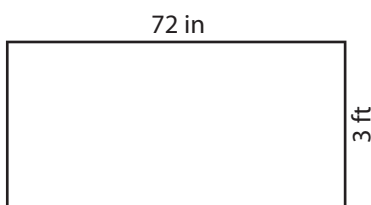
Find the area of each rectangle.

1)




Area = **45** y

2)

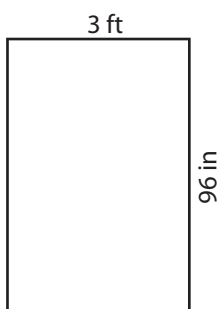


= **36** in²

3)



4)



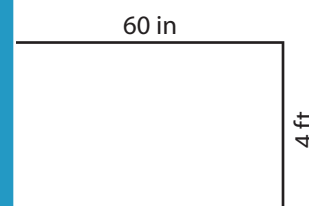
Area = **3,456** in

Gain complete access to the largest collection of worksheets in all subjects!

Members, please log in to download this worksheet.

Not a member? Please sign up to gain complete access.

www.mathworksheets4kids.com

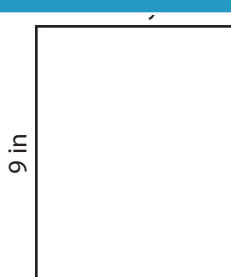


= **20** ft²

7)



Area = **30** yd²



Area = **61.56** in²



Area = **120** ft²