

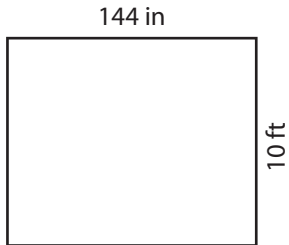
Name : _____

T1S4

Area of a Rectangle


Find the area of each rectangle.

1)



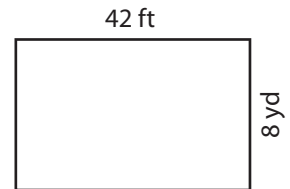
Area = _____ ft²

2)




= _____ yd²

3)



4)



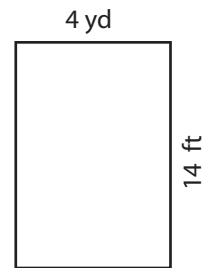
Area = _____ in²

Gain complete access to the largest collection of worksheets in all subjects!

Members, please log in to download this worksheet.

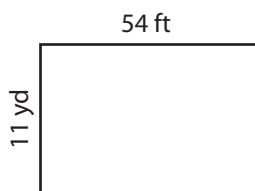
Not a member? Please sign up to gain complete access.

www.mathworksheets4kids.com

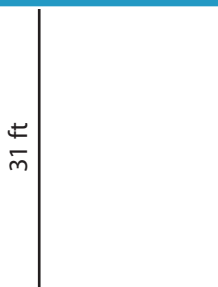


= _____ ft²

7)



Area = _____ yd²



Area = _____ ft²



Area = _____ in²

Name : _____

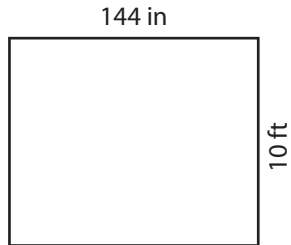
Answer key

T1S4

Area of a Rectangle

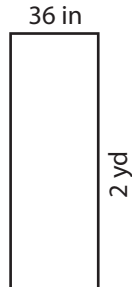
Find the area of each rectangle.

1)



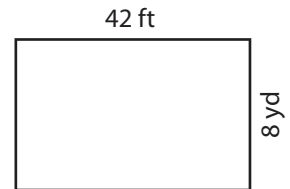
Area = 120 ft

2)




= 112 yd²

3)



4)



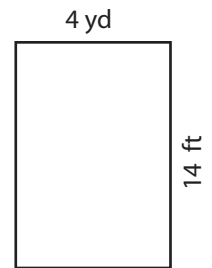
Area = 840 ft

Gain complete access to the largest collection of worksheets in all subjects!

Members, please log in to download this worksheet.

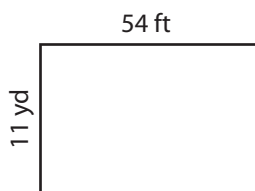
Not a member? Please sign up to gain complete access.

www.mathworksheets4kids.com

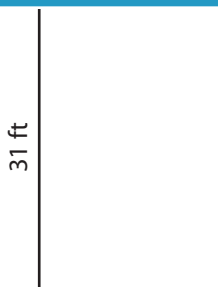


= 168 ft²

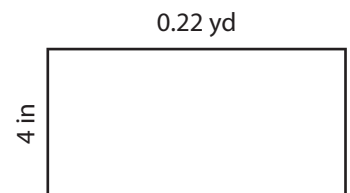
7)



Area = 198 yd²



Area = 620 ft²



Area = 31.68 in²