

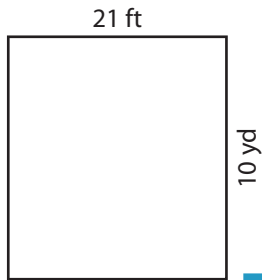
Name : _____

T1S5

Area of a Rectangle

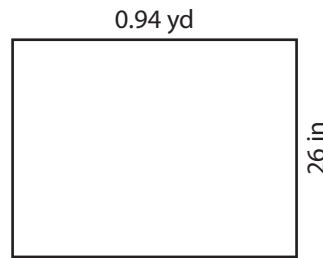
Find the area of each rectangle.

1)



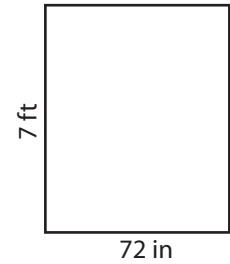
Area = _____ y

2)

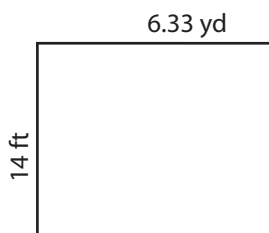


= _____ ft²

3)



4)



Area = _____ ft

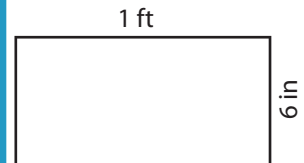
Gain complete access to the largest collection of worksheets in all subjects!

Members, please log in to download this worksheet.

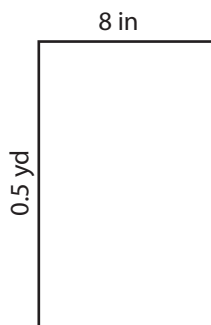
Not a member? Please sign up to gain complete access.

www.mathworksheets4kids.com

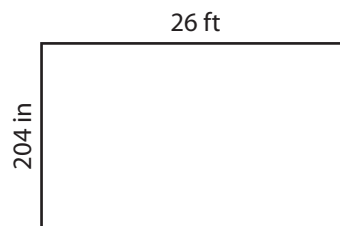
= _____ in²



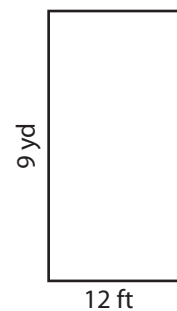
7)



Area = _____ in²



Area = _____ ft²



Area = _____ yd²

Name : _____

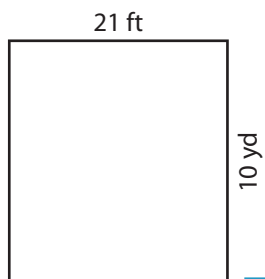
Answer key

T1S5

Area of a Rectangle


Find the area of each rectangle.

1)



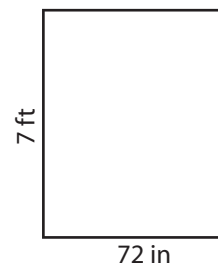
Area = 70 y

2)

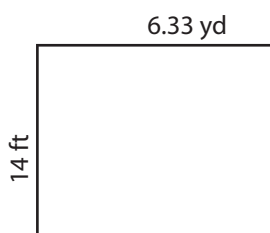


= 42 ft²

3)



4)



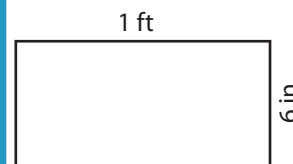
Area = 265.86 ft

Gain complete access to the largest collection of worksheets in all subjects!

Members, please log in to download this worksheet.

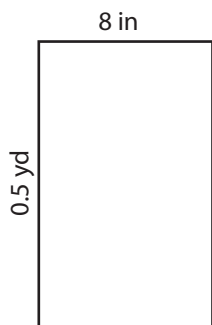
Not a member? Please sign up to gain complete access.

www.mathworksheets4kids.com

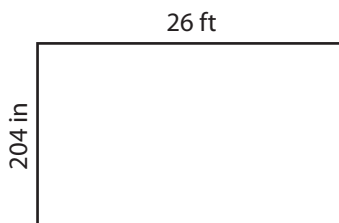


= 72 in²

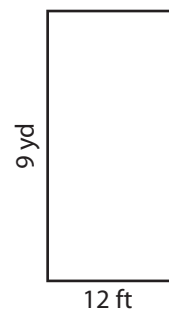
7)



Area = 144 in²



Area = 442 ft²



Area = 36 yd²