

Name : _____

Area of a Rectangle

A) Find the area of each rectangle for the given measurements.

1) width = 7 ft, length = 168 in

Area = _____ ft²

2) length = 8 in, width = 0.17 yd

Area = _____ in²

3) length = 99 ft, width = 22 yd

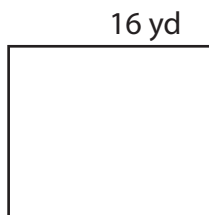
4) width = 13 in, length = 1.42 ft

Area = _____

in²

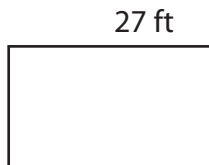
B) Find the area of each

5)



Area = _____

7)



Area = _____ yd²

PREVIEW

Gain complete access to the largest collection of worksheets in all subjects!

Members, please log in to download this worksheet.

Not a member? Please sign up to gain complete access.

www.mathworksheets4kids.com

ft²

8 ft

Area = _____ ft²

9) ABCD is a rectangle with AB = 12 inches and BC = 0.25 yard. Find the area.

_____ square inches

Name : _____

Answer key

T2S4

Area of a Rectangle

A) Find the area of each rectangle for the given measurements.

1) width = 7 ft, length = 168 in

Area = 98 ft²

2) length = 8 in, width = 0.17 yd

Area = 48.96 in²

3) length = 99 ft, width = 22 yd

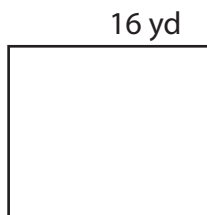
Area = 72

4) width = 13 in, length = 1.42 ft

2 in²

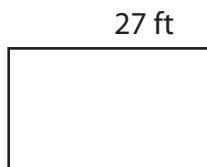
B) Find the area of each

5)



Area = 16

7)



Area = 45 yd²

PREVIEW

Gain complete access to the largest collection of worksheets in all subjects!

Members, please log in to download this worksheet.

Not a member? Please sign up to gain complete access.

www.mathworksheets4kids.com

ft²

8 ft

Area = 88 ft²

9) ABCD is a rectangle with AB = 12 inches and BC = 0.25 yard. Find the area.

108 square inches