


Name : _____

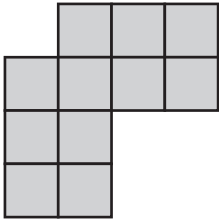
Counting Squares

L1S3

 = 1 yd²

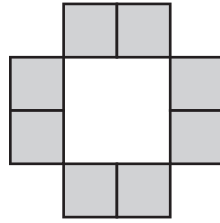
Find the area of each shape by counting the squares.

1)



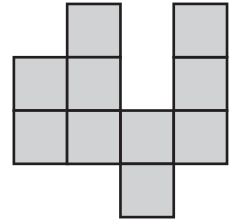
Area = yd²

2)



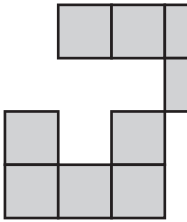
Area = yd²

3)



Area = yd²

4)



Area =

5)

PREVIEW

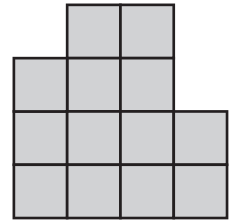
Gain complete access to the largest collection of worksheets in all subjects!

Members, please log in to download this worksheet.

Not a member? Please sign up to gain complete access.

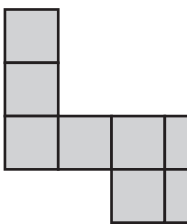
www.mathworksheets4kids.com

6)




Area = yd²

7)

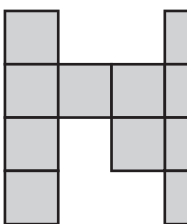


Area =



Area = yd²

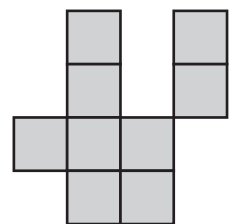
10)



Area = yd²

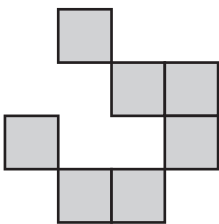


Area = yd²



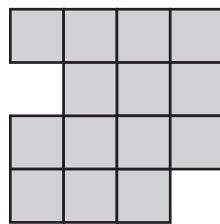
Area = yd²

13)



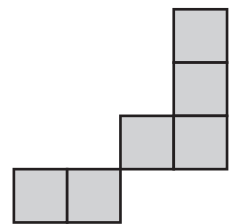
Area = yd²

14)



Area = yd²

15)




Area = yd²

Name : _____

Answer key

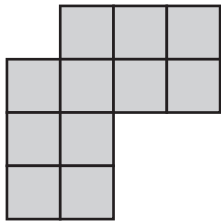
Counting Squares

L1S3

 = 1 yd²

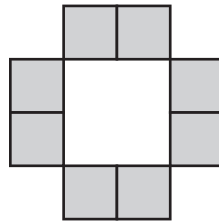
Find the area of each shape by counting the squares.

1)



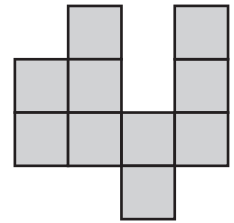
Area = **11** yd²

2)



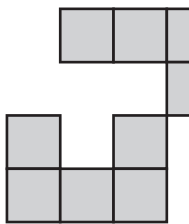
Area = **8** yd²

3)



Area = **10** yd²

4)



Area = **9** yd²

5)

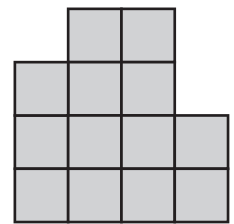
PREVIEW

Gain complete access to the largest collection of worksheets in all subjects!

Members, please log in to download this worksheet.

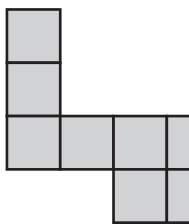
Not a member? Please sign up to gain complete access.

www.mathworksheets4kids.com




Area = **13** yd²

7)

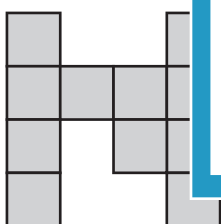


Area = **8** yd²



Area = **12** yd²

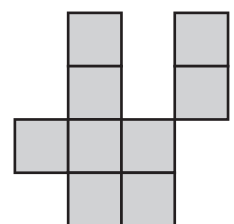
10)



Area = **11** yd²

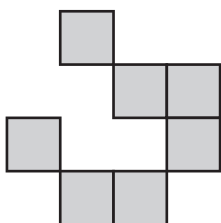


Area = **7** yd²



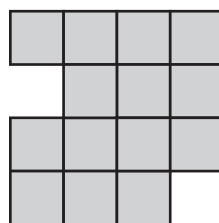
Area = **9** yd²

13)



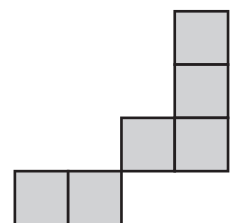
Area = **7** yd²

14)



Area = **14** yd²

15)



Area = **6** yd²