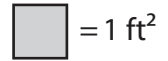


Name: _____

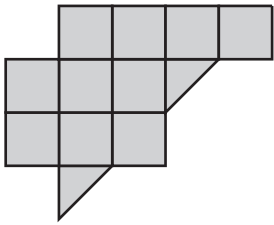
Counting Squares

L2S1



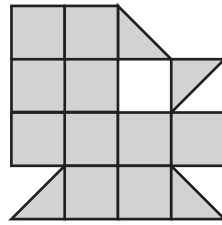
Find the area of each shape.

1)



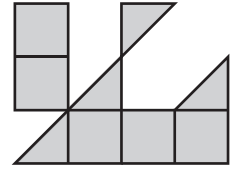
Area = ft²

2)



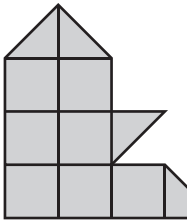
Area = ft²

3)



Area = ft²

4)



Area = ft²

5)

PREVIEW

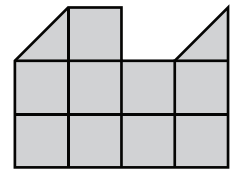
Gain complete access to the largest collection of worksheets in all subjects!

Members, please log in to download this worksheet.

Not a member? Please sign up to gain complete access.

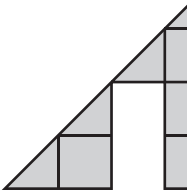
www.mathworksheets4kids.com

6)

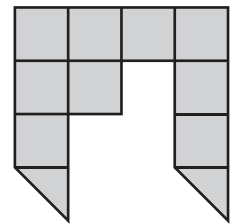


Area = ft²

7)

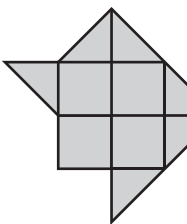


Area = ft²



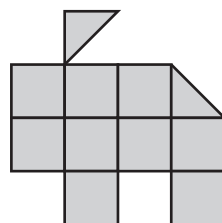
Area = ft²

10)



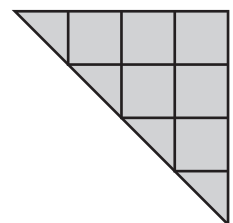
Area = ft²

14)



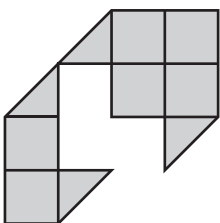
Area = ft²

15)



Area = ft²

13)



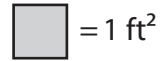
Area = ft²

Name: _____

Answer key

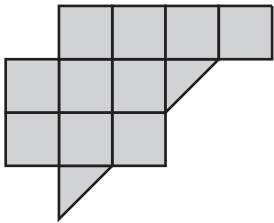
Counting Squares

L2S1



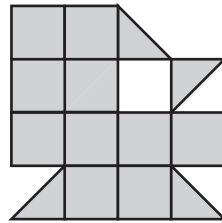
Find the area of each shape.

1)



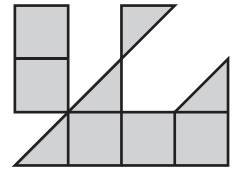
Area = **11** ft²

2)



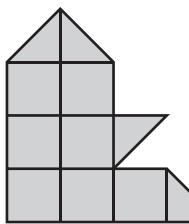
Area = **12** ft²

3)



Area = **7** ft²

4)



Area = **9** ft²

5)

PREVIEW

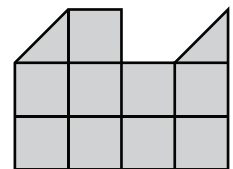
Gain complete access to the largest collection of worksheets in all subjects!

Members, please log in to download this worksheet.

Not a member? Please sign up to gain complete access.

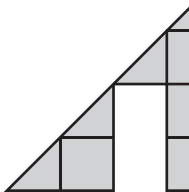
www.mathworksheets4kids.com

6)

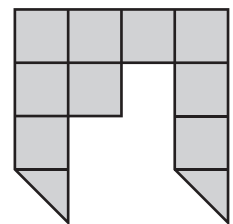


Area = **10** ft²

7)

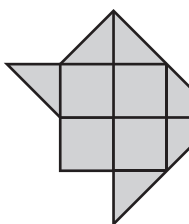


Area = **6** ft²



Area = **10** ft²

10)

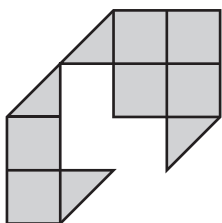


Area = **7** ft²

Area = **5** ft²

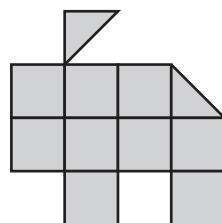
Area = **9** ft²

13)



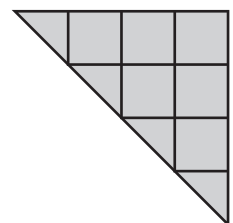
Area = **8** ft²

14)



Area = **10** ft²

15)



Area = **8** ft²