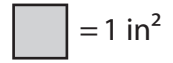


Name : \_\_\_\_\_

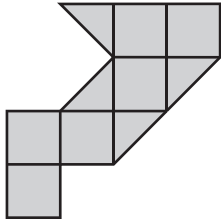
# Counting Squares

L2S2



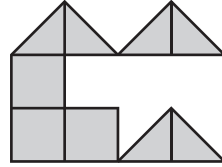
Find the area of each shape.

1)



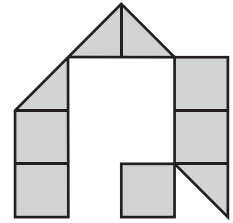
Area =  in<sup>2</sup>

2)



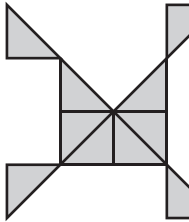
Area =  in<sup>2</sup>

3)



Area =  in<sup>2</sup>

4)



Area =

5)

## PREVIEW

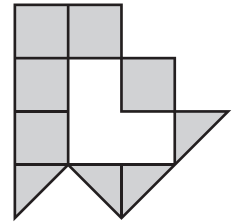
Gain complete access to the largest collection of worksheets in all subjects!

Members, please log in to download this worksheet.

Not a member? Please sign up to gain complete access.

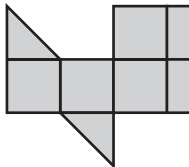
[www.mathworksheets4kids.com](http://www.mathworksheets4kids.com)

6)

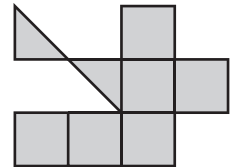


Area =  in<sup>2</sup>

7)

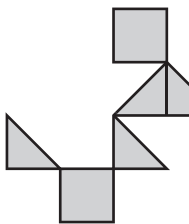


Area =



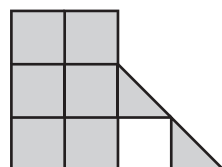
Area =  in<sup>2</sup>

10)



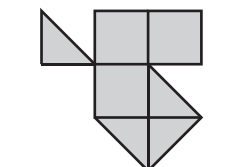
Area =  in<sup>2</sup>

14)



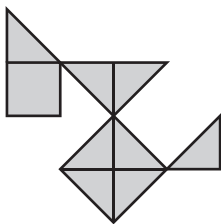
Area =  in<sup>2</sup>

15)



Area =  in<sup>2</sup>

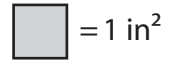
13)



Area =  in<sup>2</sup>

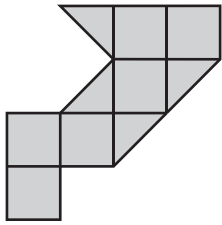
**Counting Squares**

L2S2



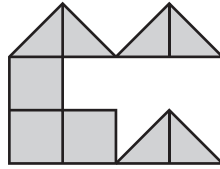
Find the area of each shape.

1)



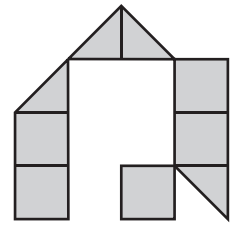
Area = **8** in<sup>2</sup>

2)



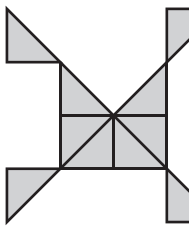
Area = **6** in<sup>2</sup>

3)



Area = **7** in<sup>2</sup>

4)



Area = **5** in<sup>2</sup>

5)

# PREVIEW

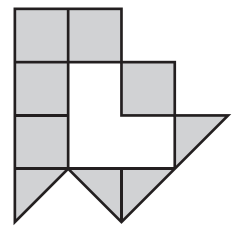
Gain complete access to the largest collection of worksheets in all subjects!

Members, please log in to download this worksheet.

Not a member? Please sign up to gain complete access.

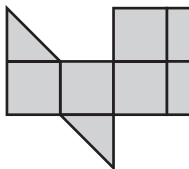
[www.mathworksheets4kids.com](http://www.mathworksheets4kids.com)

6)

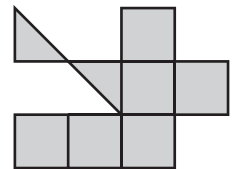


Area = **7** in<sup>2</sup>

7)

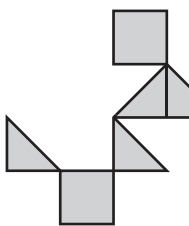


Area = **7** in<sup>2</sup>



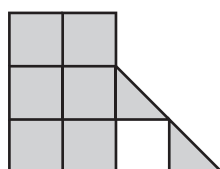
Area = **7** in<sup>2</sup>

10)



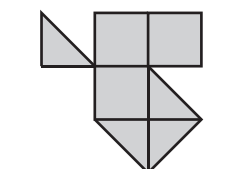
Area = **4** in<sup>2</sup>

14)



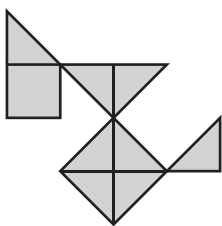
Area = **7** in<sup>2</sup>

15)



Area = **5** in<sup>2</sup>

13)



Area = **5** in<sup>2</sup>