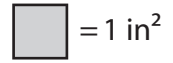


Name : _____

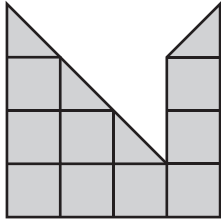
Counting Squares

L2S4



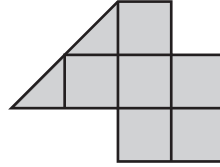
Find the area of each shape.

1)



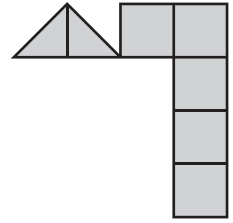
Area = in²

2)



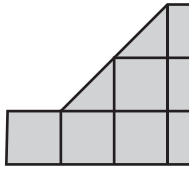
Area = in²

3)



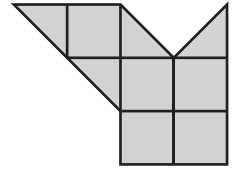
Area = in²

4)



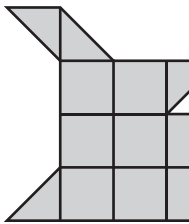
Area =

5)



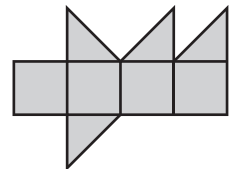
Area = in²

7)



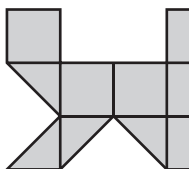
Area =

6)



Area = in²

10)



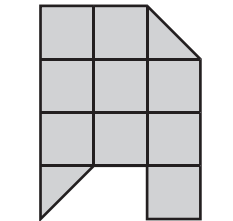
Area = in²

14)



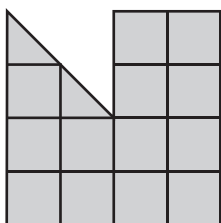
Area = in²

15)

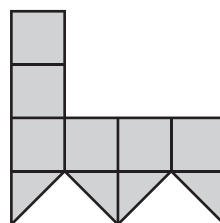


Area = in²

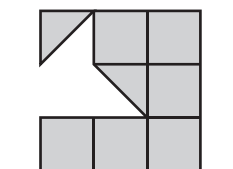
13)



Area = in²



Area = in²



Area = in²

PREVIEW

Gain complete access to the largest collection of worksheets in all subjects!

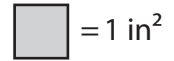
Members, please log in to download this worksheet.

Not a member? Please sign up to gain complete access.

www.mathworksheets4kids.com

Counting Squares

L2S4



Find the area of each shape.

1)
 Area = **11** in²

2)
 Area = **7** in²

3)
 Area = **6** in²

4)
 Area = **8** in²

5)
 Area = **7** in²

6)
 Area = **7** in²

7)
 Area = **10** in²

8)
 Area = **6** in²

9)
 Area = **10** in²

10)
 Area = **8** in²

11)
 Area = **10** in²

12)
 Area = **10** in²

13)
 Area = **14** in²

14)
 Area = **8** in²

15)
 Area = **7** in²

PREVIEW

Gain complete access to the largest collection of worksheets in all subjects!

Members, please log in to download this worksheet.

Not a member? Please sign up to gain complete access.

www.mathworksheets4kids.com