

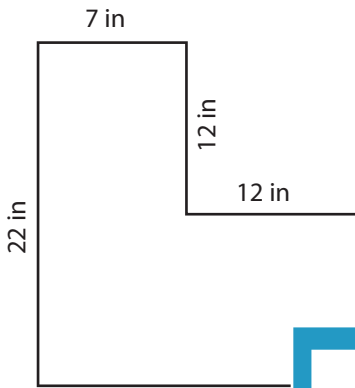
Name : \_\_\_\_\_

## Area of L-Shapes

Sheet 2

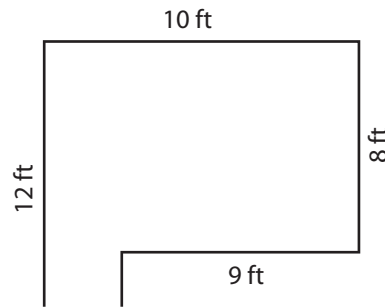
Find the area of each shape.

1)



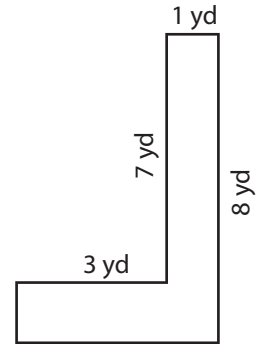
Area = \_\_\_\_\_

2)



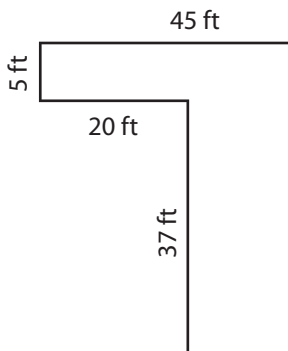
Area = \_\_\_\_\_

3)



Area = \_\_\_\_\_

4)



Area = \_\_\_\_\_

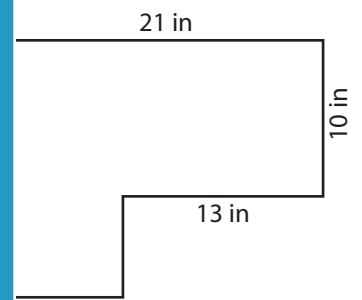
**PREVIEW**

Gain complete access to the largest collection of worksheets in all subjects!

Members, please log in to download this worksheet.

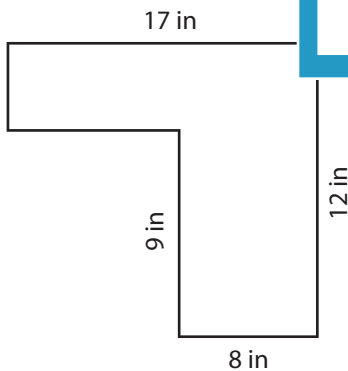
Not a member? Please sign up to gain complete access.

[www.mathworksheets4kids.com](http://www.mathworksheets4kids.com)

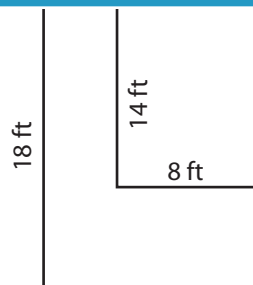


Area = \_\_\_\_\_

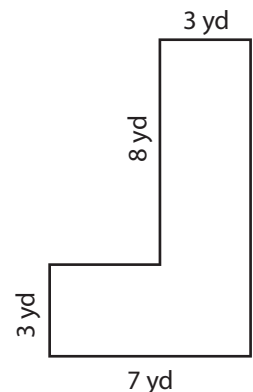
7)



Area = \_\_\_\_\_



Area = \_\_\_\_\_



Area = \_\_\_\_\_

Name : \_\_\_\_\_

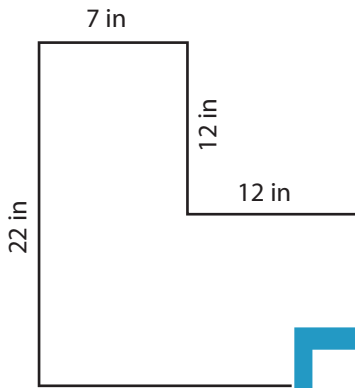
## Answer key

Sheet 2

### Area of L-Shapes

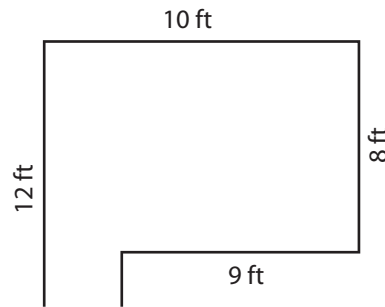
Find the area of each shape.

1)

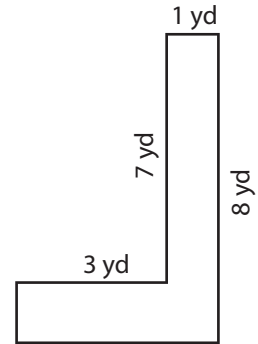


Area = 274 in<sup>2</sup>

2)

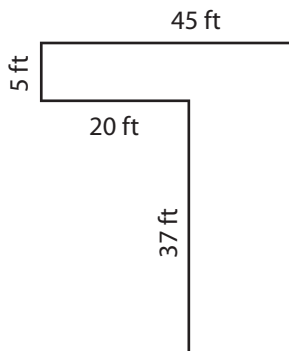


3)



Area = 11 yd<sup>2</sup>

4)



Area = 1,150 ft<sup>2</sup>

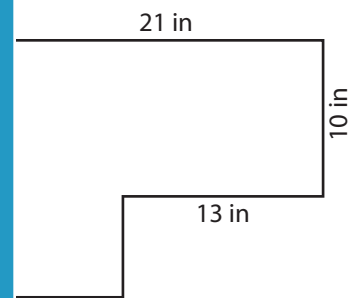
**PREVIEW**

Gain complete access to the largest collection of worksheets in all subjects!

Members, please log in to download this worksheet.

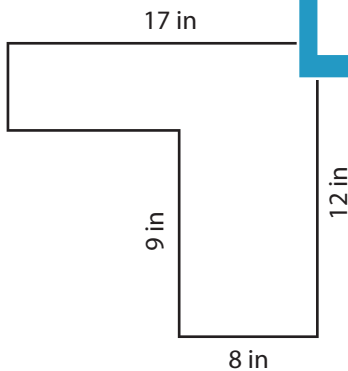
Not a member? Please sign up to gain complete access.

[www.mathworksheets4kids.com](http://www.mathworksheets4kids.com)

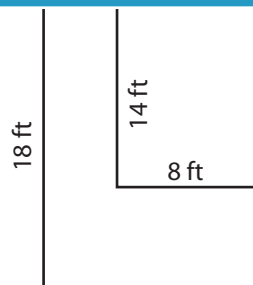


Area = 242 in<sup>2</sup>

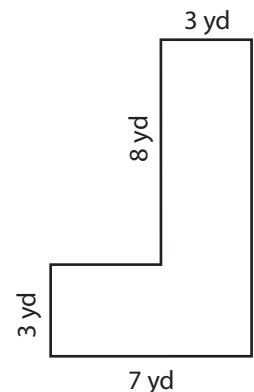
7)



Area = 123 in<sup>2</sup>



Area = 68 ft<sup>2</sup>



Area = 45 yd<sup>2</sup>