

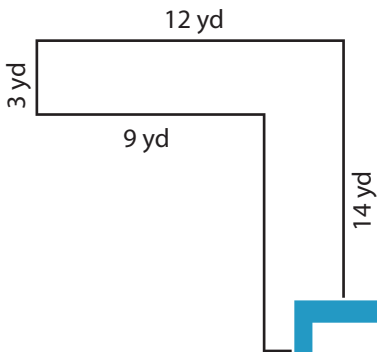
Name : _____

Area of L-Shapes

Sheet 3

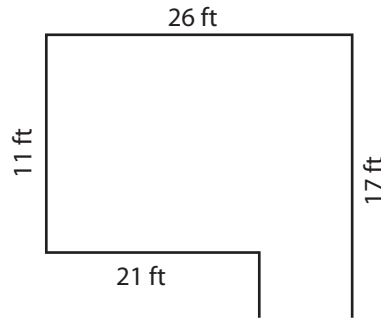
Find the area of each shape.

1)

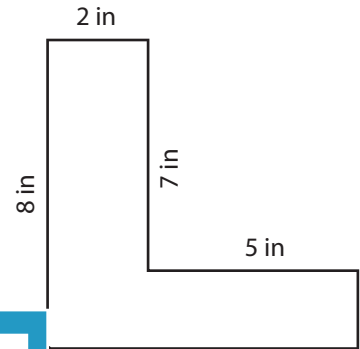


Area = _____

2)

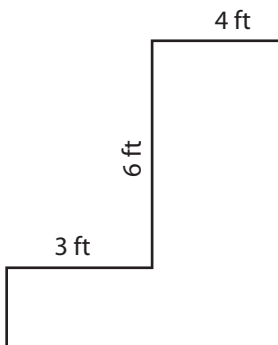


3)



Area = _____

4)



Area = _____

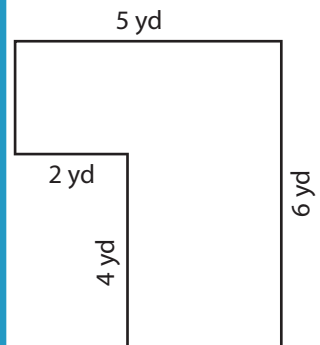
PREVIEW

Gain complete access to the largest collection of worksheets in all subjects!

Members, please log in to download this worksheet.

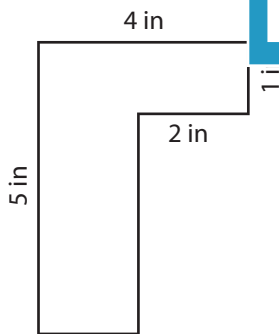
Not a member? Please sign up to gain complete access.

www.mathworksheets4kids.com

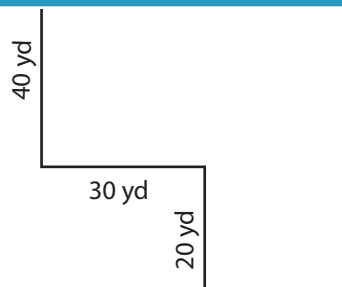


Area = _____

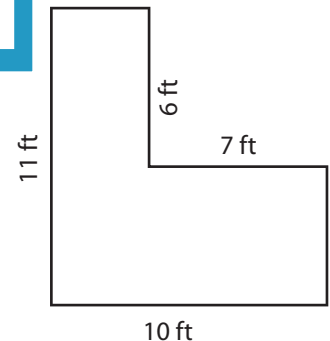
7)



Area = _____



Area = _____



Area = _____

Name : _____

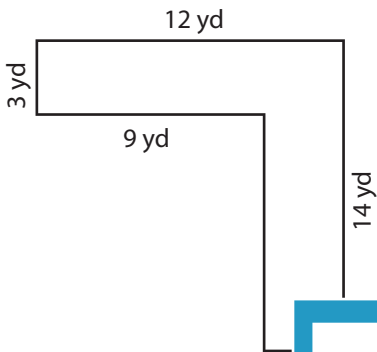
Answer key

Area of L-Shapes

Sheet 3

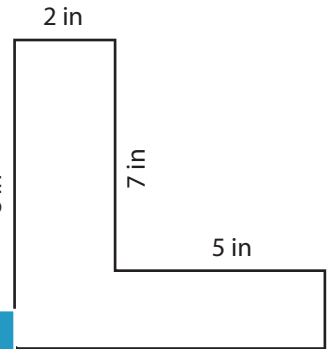
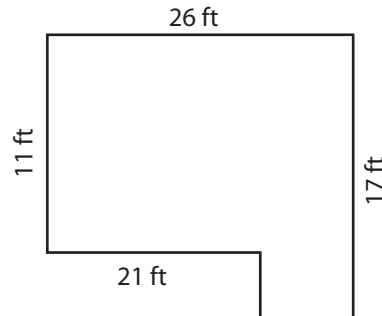
Find the area of each shape.

1)



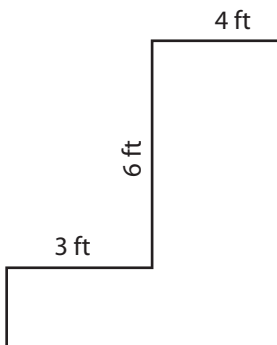
Area = 69 yd²

2)



Area = 21 in²

4)



Area = 31 ft²

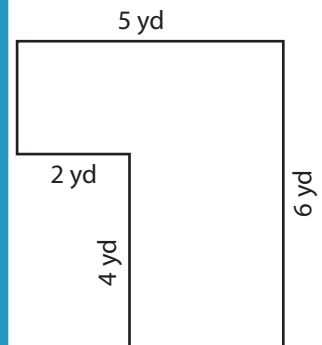
PREVIEW

Gain complete access to the largest collection of worksheets in all subjects!

Members, please log in to download this worksheet.

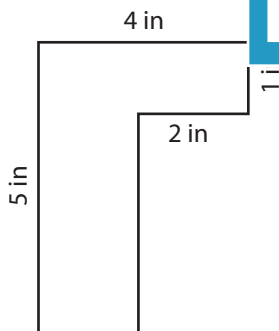
Not a member? Please sign up to gain complete access.

www.mathworksheets4kids.com

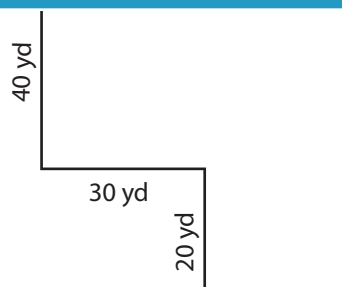


Area = 22 yd²

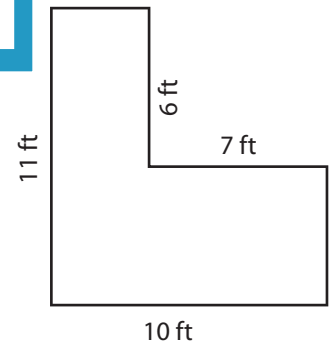
7)



Area = 12 in²



Area = 3,000 yd²



Area = 68 ft²