

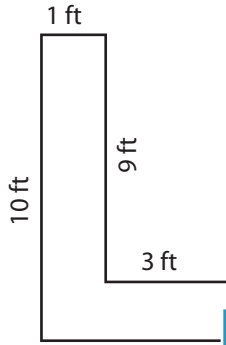
Name : _____

Area of L-Shapes

Sheet 4

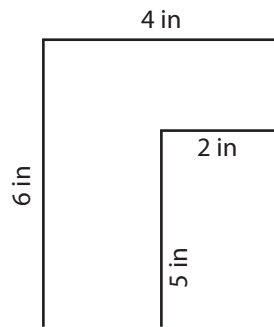
Find the area of each shape.

1)

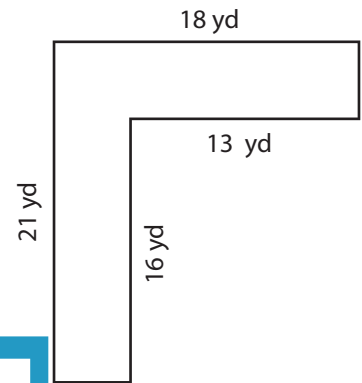


Area = _____

2)

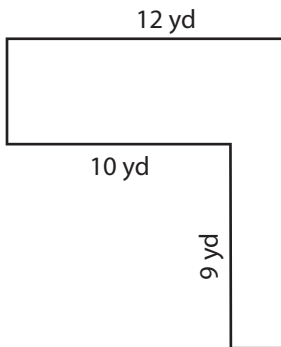


3)



Area = _____

4)



Area = _____

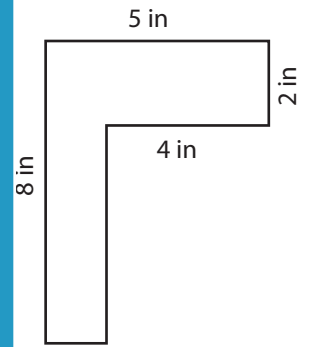
PREVIEW

Gain complete access to the largest collection of worksheets in all subjects!

Members, please log in to download this worksheet.

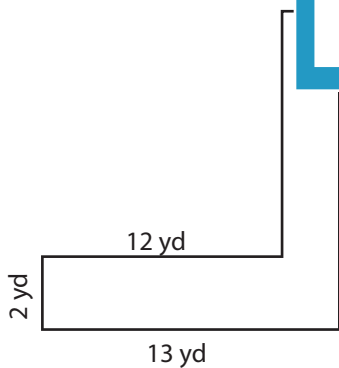
Not a member? Please sign up to gain complete access.

www.mathworksheets4kids.com

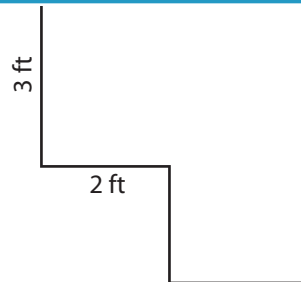


Area = _____

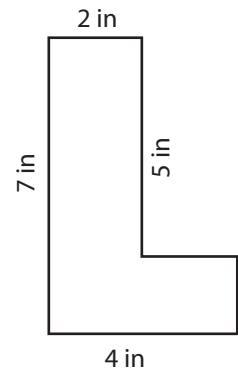
7)



Area = _____



Area = _____



Area = _____

Name : _____

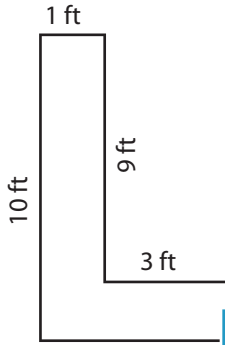
Answer key

Area of L-Shapes

Sheet 4

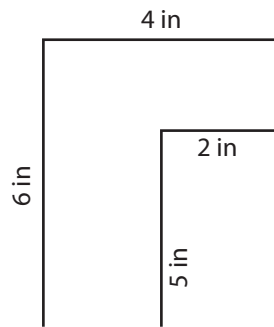
Find the area of each shape.

1)

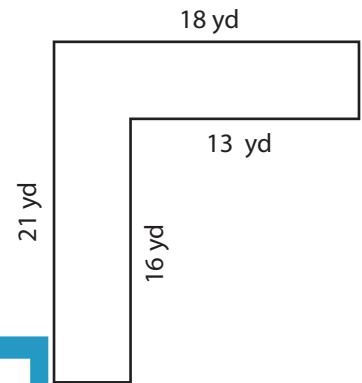


Area = 13 ft²

2)

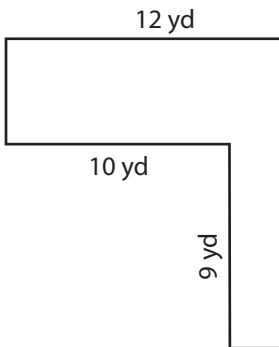


3)



Area = 170 yd²

4)



Area = 54 yd²

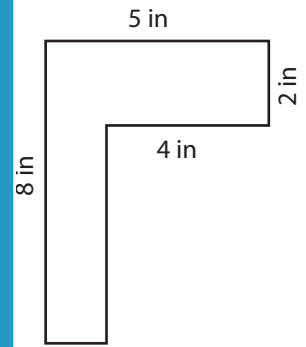
PREVIEW

Gain complete access to the largest collection of worksheets in all subjects!

Members, please log in to download this worksheet.

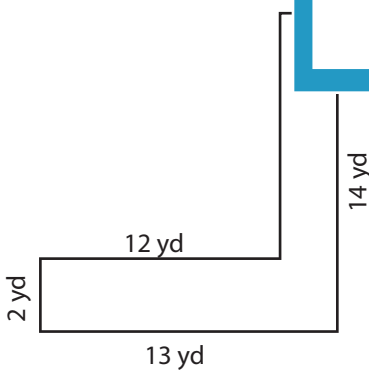
Not a member? Please sign up to gain complete access.

www.mathworksheets4kids.com

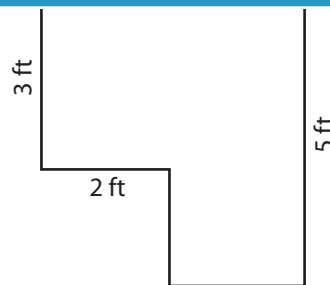


Area = 16 in²

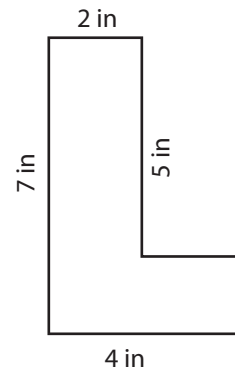
7)



Area = 38 yd²



Area = 16 ft²



Area = 18 in²