

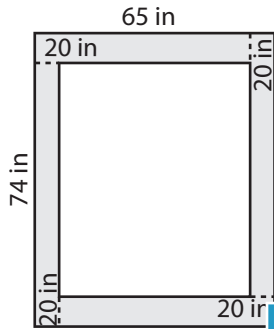
Name : _____

Area of Rectangular Paths

L2S2

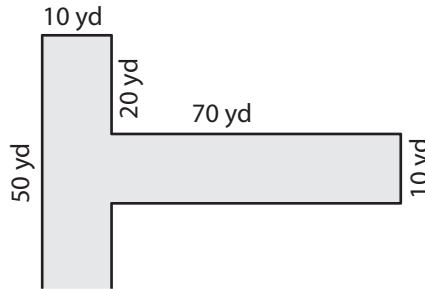
Find the area of each shaded region.

1)

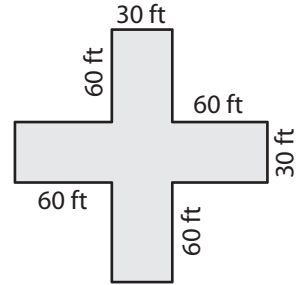


Area = _____

2)

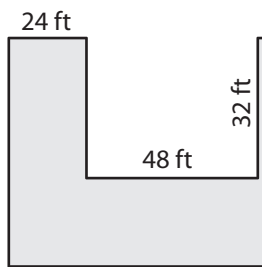


3)



Area = _____

4)




Area = _____

Gain complete access to the largest collection of worksheets in all subjects!

Members, please log in to download this worksheet.

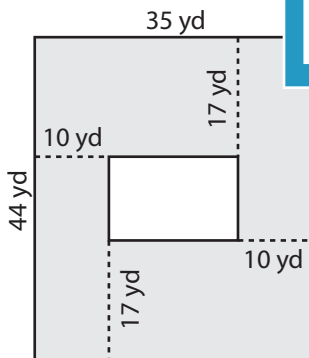
Not a member? Please sign up to gain complete access.

www.mathworksheets4kids.com

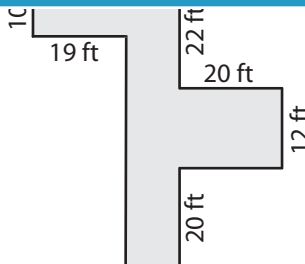


Area = _____

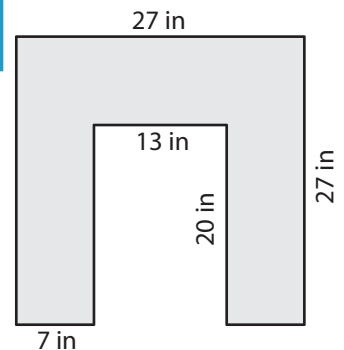
7)



Area = _____



Area = _____



Area = _____

Name : _____

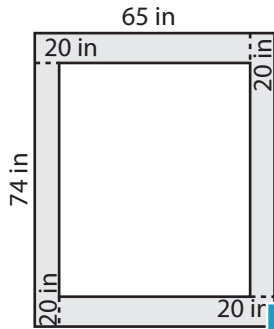
Answer key

Area of Rectangular Paths

L2S2

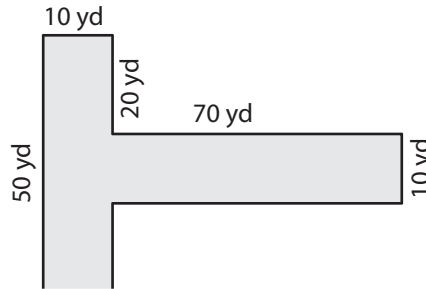
Find the area of each shaded region.

1)



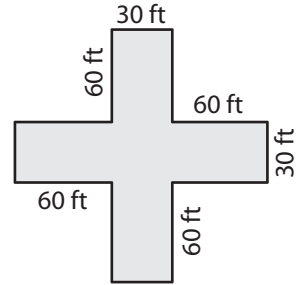
Area = 3,960 in²

2)



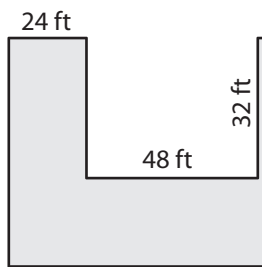
Area = 8,100 ft²

3)



Area = 8,100 ft²

4)




Area = 3,840 ft²

Gain complete access to the largest collection of worksheets in all subjects!

Members, please log in to download this worksheet.

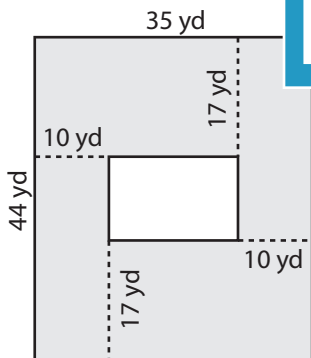
Not a member? Please sign up to gain complete access.

www.mathworksheets4kids.com

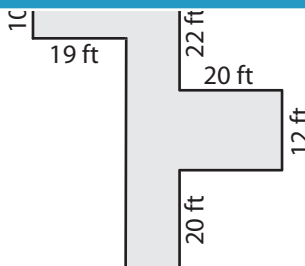


Area = 1,508 yd²

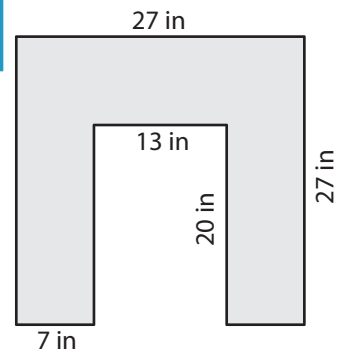
7)



Area = 1,390 yd²



Area = 1,024 ft²



Area = 469 in²