

# Alien Invasion - Bar Graph



**PREVIEW**



Gain complete access to the largest collection of worksheets in all subjects!

Members, please log in to download this worksheet.

Not a member? Please sign up to gain complete access.

[www.mathworksheets4kids.com](http://www.mathworksheets4kids.com)

Color the squares to show



questions.

How many more are there?

How many fewer are there than ?

3) How many , , and are there in all?

# Alien Invasion - Bar Graph



**PREVIEW**

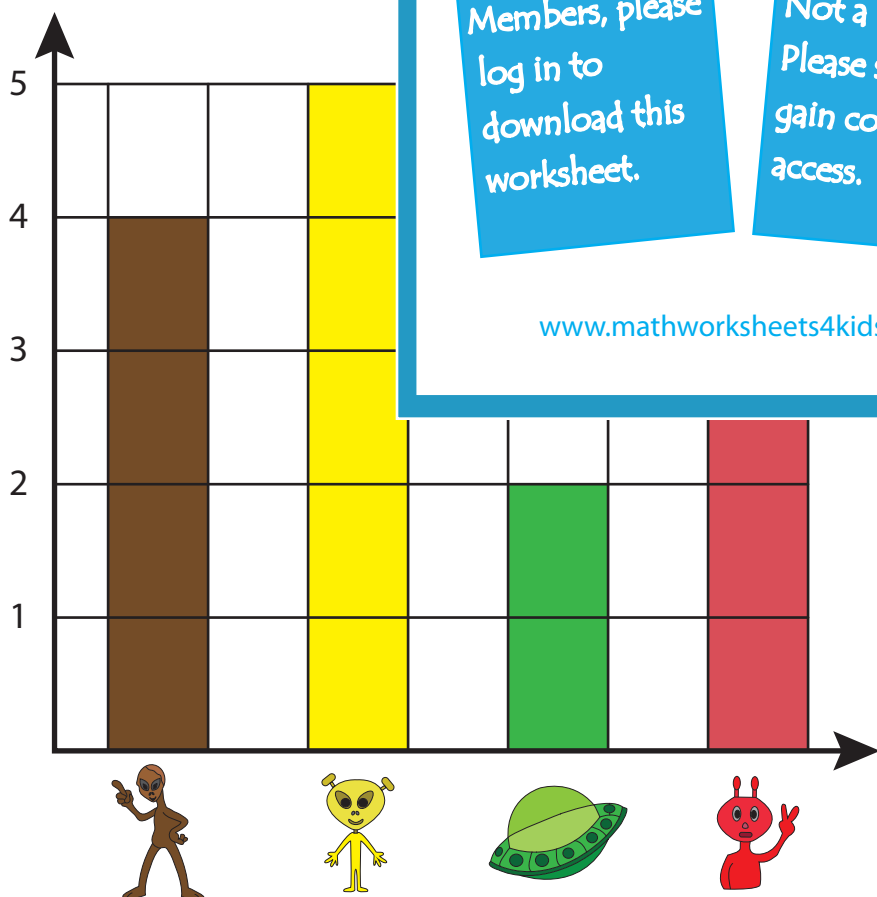
Gain complete access to the largest collection of worksheets in all subjects!

Members, please log in to download this worksheet.

Not a member? Please sign up to gain complete access.

[www.mathworksheets4kids.com](http://www.mathworksheets4kids.com)

Color the squares to show



questions.

How many more are there?

How many fewer are there than ?

2

3) How many , , and are there in all?

12