





## Bar Graph - Fruit Stand

Mark recorded a data about the fruits sold on a particular day. Draw a bar graph to represent his data and answer the questions.

<p><b>Apple</b></p>  <p><b>7</b></p>	<p><b>Mango</b></p>  <p><b>5</b></p>	<p><b>Pineapple</b></p>  <p><b>4</b></p>	<p><b>Strawberry</b></p>  <p><b>9</b></p>
---	---	--	--



# PREVIEW

Gain complete access to the largest collection of worksheets in all subjects!





Members, please log in to download this worksheet.

Not a member? Please sign up to gain complete access.

[www.mathworksheets4kids.com](http://www.mathworksheets4kids.com)



- 1) Which fruit did Mark sell more: apple or strawberry? \_\_\_\_\_
- 2) How many pineapples were sold? \_\_\_\_\_
- 3) How many fewer pineapples than mangoes were sold? \_\_\_\_\_
- 4) Circle the fruit that was sold the most.
 





Name : \_\_\_\_\_

## Answer Key

Sheet 3

### Bar Graph - Fruit Stand

Mark recorded a data about the fruits sold on a particular day. Draw a bar graph to represent his data and answer the questions.

Apple	Mango	Pineapple	Strawberry
			
7	5	4	9



1) Which fruit did Mark sell more: apple or strawberry?

Strawberry

2) How many pineapples were sold?

4

3) How many fewer pineapples than mangoes were sold?

1

4) Circle the fruit that was sold the most.

