






Name : _____

Bar Graph - School Transportation

Sheet 2

A survey is conducted among a group of students about how they get to school, and the data is recorded. Use the data to create a bar graph. Write a title, label the two axes, make an appropriate scale, and draw the graph.

By Car	By Train	On Foot	By Bicycle	By Bus
				
80				100

PREVIEW

Gain complete access to the largest collection of worksheets in all subjects!

Members, please log in to download this worksheet.

Not a member? Please sign up to gain complete access.

www.mathworksheets4kids.com






Name : _____

Answer Key

Sheet 2

Bar Graph - School Transportation

A survey is conducted among a group of students about how they get to school, and the data is recorded. Use the data to create a bar graph. Write a title, label the two axes, make an appropriate scale, and draw the graph.

By Car	By Train	On Foot	By Bicycle	By Bus
				
80				100

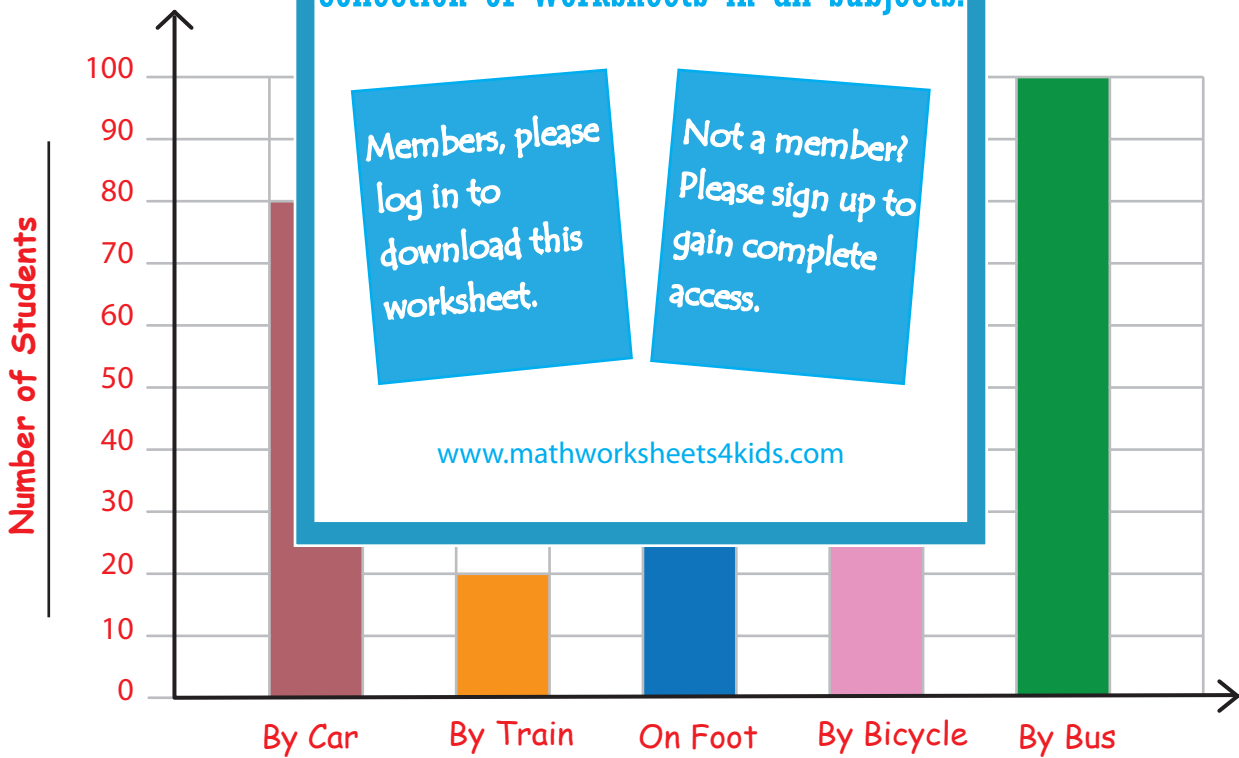
PREVIEW

Gain complete access to the largest collection of worksheets in all subjects!

Members, please log in to download this worksheet.

Not a member? Please sign up to gain complete access.

www.mathworksheets4kids.com



How Students Get to School