

# Biggest vs Smallest

Tick the box under biggest object and cross out the box under smallest object in each group.


1)



2)



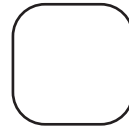

3)



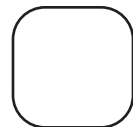
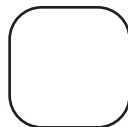
**Answer Key****Biggest vs Smallest**

Tick the box under biggest object and cross out the box under smallest object in each group.

1)



2)



3)

