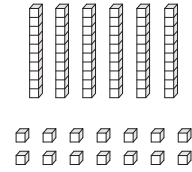
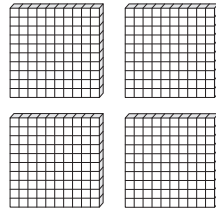
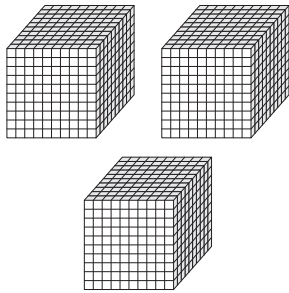


Place Value Blocks - 4 Digits

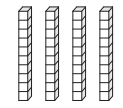
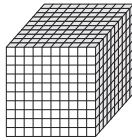
L2S4

Write the number formed by base ten blocks.


1)



2)



3)

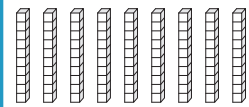


Gain complete access to the largest collection of worksheets in all subjects!

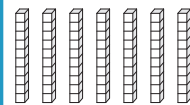
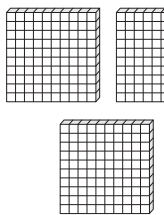
Members, please log in to download this worksheet.

Not a member? Please sign up to gain complete access.

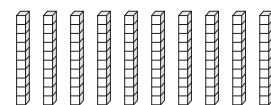

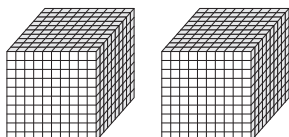
www.mathworksheets4kids.com



4)



5)



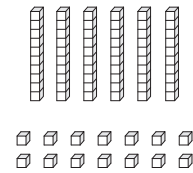
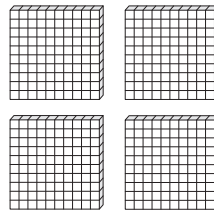
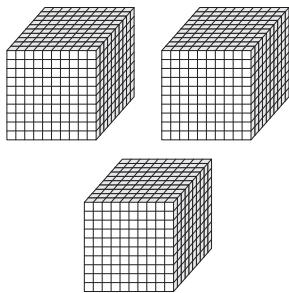
Answer key

Place Value Blocks - 4 Digits

L2S4

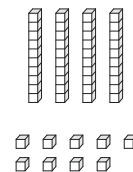
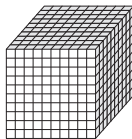
Write the number formed by base ten blocks.

1)



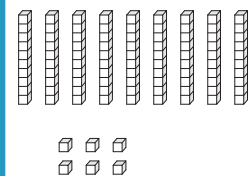

3474

2)



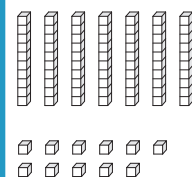
2049

3)



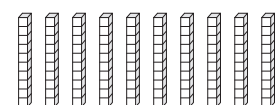

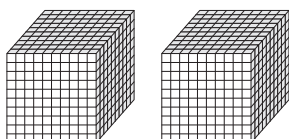
4826

4)



1391

5)



2400

PREVIEW

Gain complete access to the largest collection of worksheets in all subjects!

Members, please log in to download this worksheet.

Not a member? Please sign up to gain complete access.

www.mathworksheets4kids.com