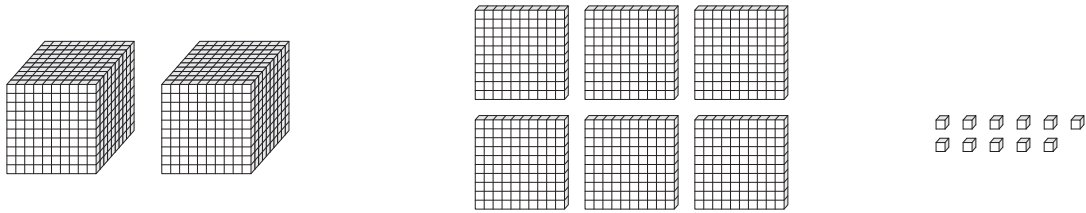


Place Value Blocks - 4 Digits

L2S5

Write the number formed by base ten blocks.

1)



2)



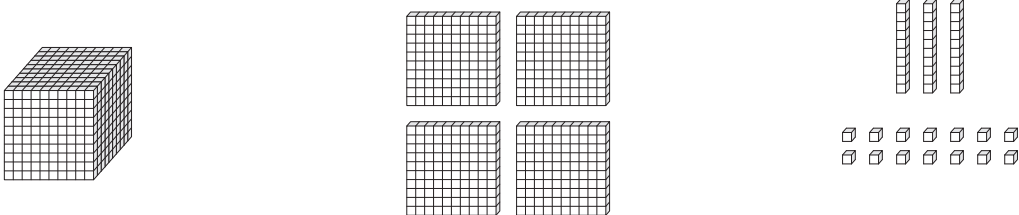
3)



4)



5)



PREVIEW

Gain complete access to the largest collection of worksheets in all subjects!

Members, please log in to download this worksheet.

Not a member? Please sign up to gain complete access.

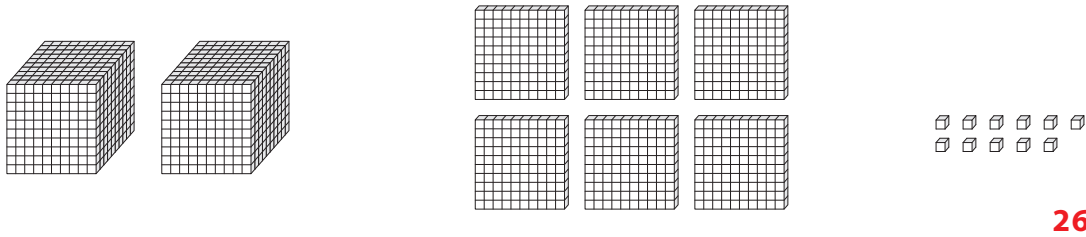
www.mathworksheets4kids.com

Answer key**Place Value Blocks - 4 Digits**

L2S5

Write the number formed by base ten blocks.

1)

2611

2)

4100

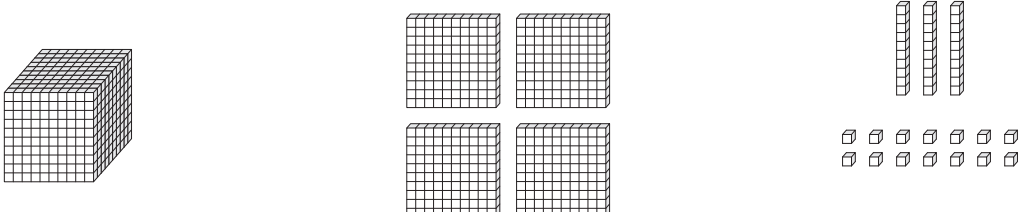
3)

1189

4)

4316

5)

1444

PREVIEW

Gain complete access to the largest collection of worksheets in all subjects!

Members, please log in to download this worksheet.

Not a member? Please sign up to gain complete access.

www.mathworksheets4kids.com