

Comparing 3-Digit Numbers - Base Ten Blocks

Count the base-ten blocks in each set, and compare using $<$, $>$, or $=$.

1)

_____ ○ _____

2)

_____ ○ _____

3)

_____ ○ _____

4)

_____ ○ _____

5)

_____ ○ _____

PREVIEW

Gain complete access to the largest collection of worksheets in all subjects!

Members, please log in to download this worksheet.

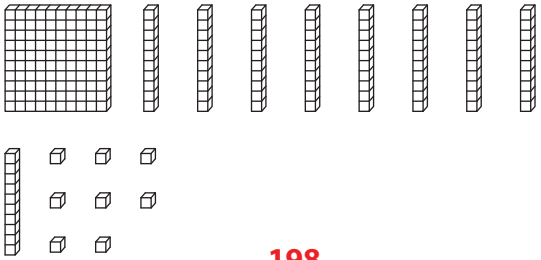
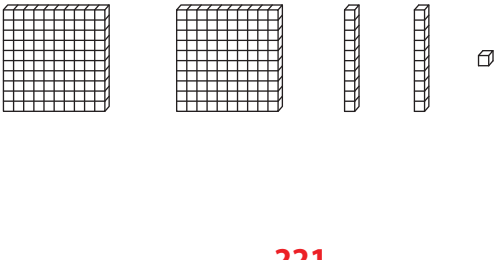
Not a member? Please sign up to gain complete access.

www.mathworksheets4kids.com

Name : _____

Comparing 3-Digit Numbers - Base Ten Blocks

Count the base-ten blocks in each set, and compare using $<$, $>$, or $=$.

1)  

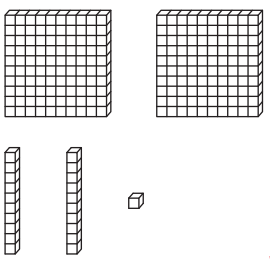
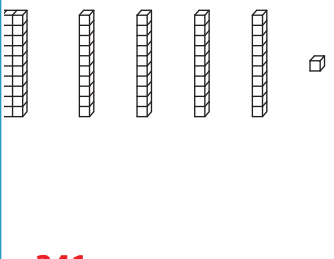
$<$

198 221

2)  

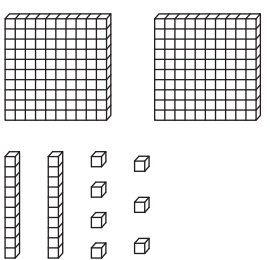
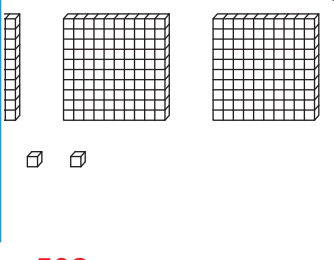
$<$

441 418

3)  

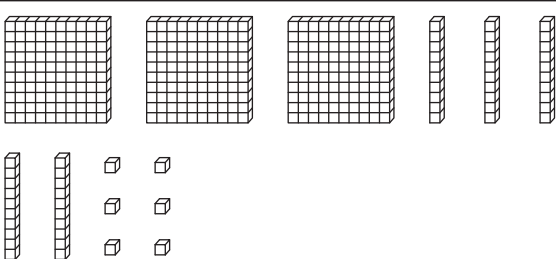
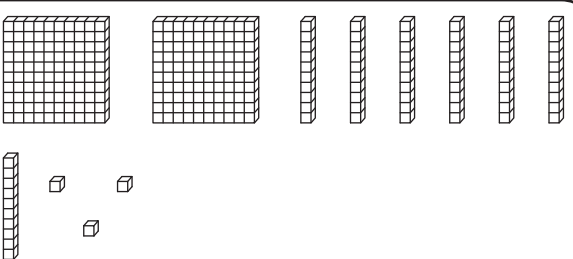
$<$

341 314

4)  

$<$

427 508

5)  

$>$

356 273

PREVIEW

Gain complete access to the largest collection of worksheets in all subjects!

Members, please log in to download this worksheet.

Not a member? Please sign up to gain complete access.

www.mathworksheets4kids.com