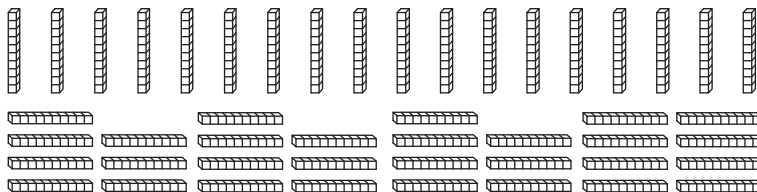
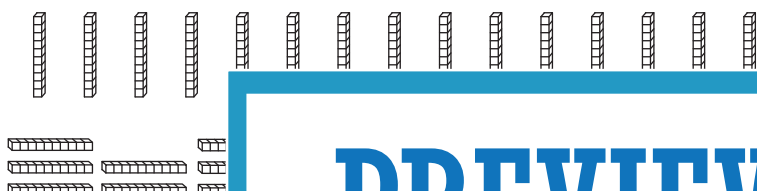
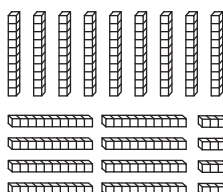


**Hundreds & Tens**


How many hundreds can you form? Also find the tens that left over.

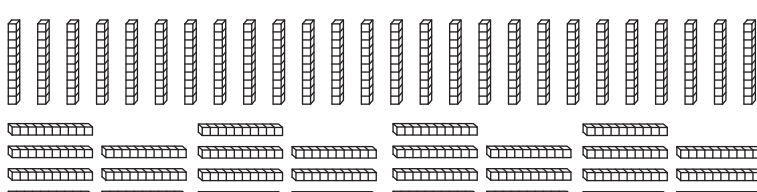
1)  \_\_\_\_\_ hundreds \_\_\_\_\_ tens

2)  \_\_\_\_\_ hundreds \_\_\_\_\_ tens

3)  \_\_\_\_\_ hundreds \_\_\_\_\_ tens

4)  \_\_\_\_\_ hundreds \_\_\_\_\_ tens

5)  \_\_\_\_\_ hundreds \_\_\_\_\_ tens

6)  \_\_\_\_\_ hundreds \_\_\_\_\_ tens

**PREVIEW**

Gain complete access to the largest collection of worksheets in all subjects!

Members, please log in to download this worksheet.

Not a member? Please sign up to gain complete access.

[www.mathworksheets4kids.com](http://www.mathworksheets4kids.com)

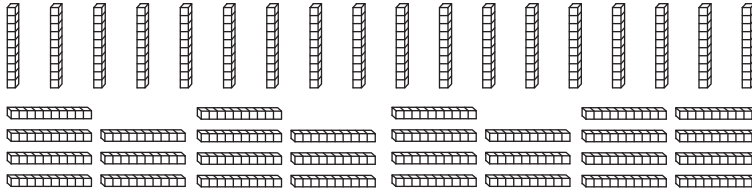
**Answer key**

Sheet 3


**Hundreds & Tens**

How many hundreds can you form? Also find the tens that left over.

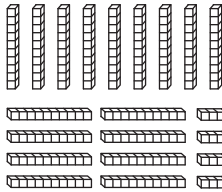
1)

4 hundreds 7 tens

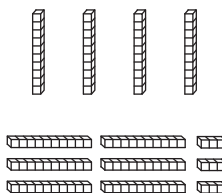
2)

\_\_\_\_\_ hundreds 5 tens

3)

\_\_\_\_\_ hundreds 2 tens

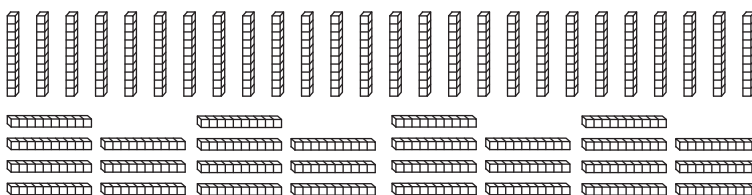
4)

\_\_\_\_\_ hundreds 3 tens

5)

\_\_\_\_\_ hundreds 2 tens

6)

5 hundreds 4 tens

**PREVIEW**

Gain complete access to the largest collection of worksheets in all subjects!

Members, please log in to download this worksheet.

Not a member? Please sign up to gain complete access.

[www.mathworksheets4kids.com](http://www.mathworksheets4kids.com)