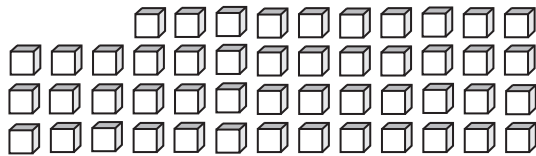


Tens & Ones

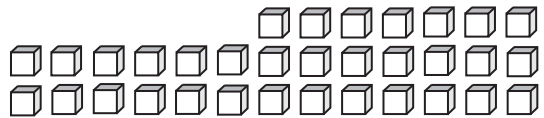
How many tens can you form? Also find the ones that left over.

1)



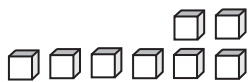
_____ tens _____ ones

2)



_____ tens _____ ones

3)



_____ tens


PREVIEW

Gain complete access to the largest collection of worksheets in all subjects!

Members, please log in to download this worksheet.


Not a member? Please sign up to gain complete access.

www.mathworksheets4kids.com

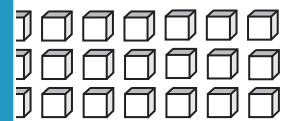


_____ ones

5)

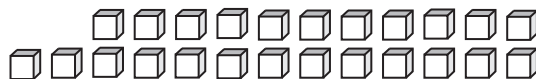


_____ tens



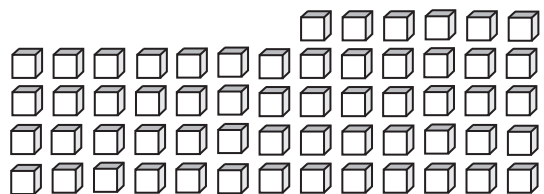
_____ ones

7)



_____ tens _____ ones

8)



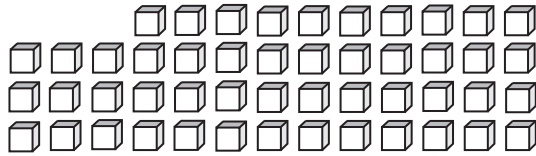
_____ tens _____ ones

Answer key**Tens & Ones**

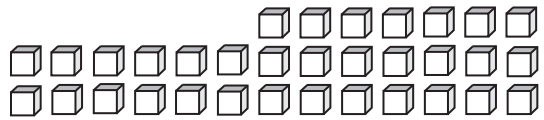
Sheet 1

How many tens can you form? Also find the ones that left over.

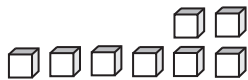
1)

4 tens 9 ones

2)

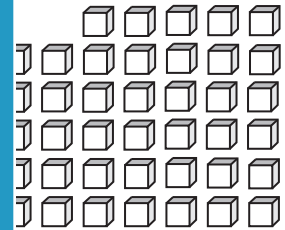
3 tens 3 ones

3)

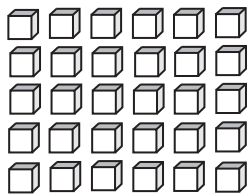
2 tens

PREVIEW

Gain complete access to the largest collection of worksheets in all subjects!

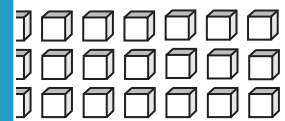
0 ones

5)

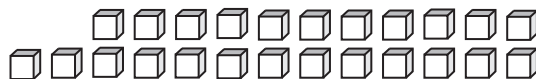
6 tens

Members, please log in to download this worksheet.

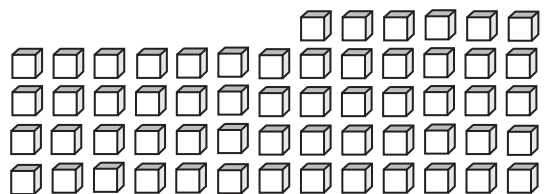
Not a member? Please sign up to gain complete access.

www.mathworksheets4kids.com
5 ones

7)

2 tens 4 ones

8)

5 tens 8 ones