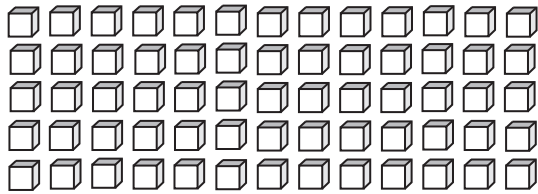


Tens & Ones


How many tens can you form? Also find the ones that left over.

1)



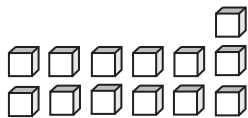
_____ tens _____ ones

2)



_____ tens _____ ones

3)



_____ tens

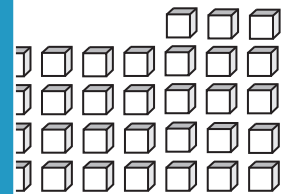
PREVIEW

Gain complete access to the largest collection of worksheets in all subjects!

Members, please log in to download this worksheet.

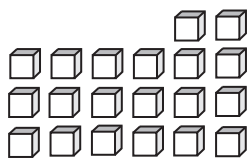
Not a member? Please sign up to gain complete access.

www.mathworksheets4kids.com

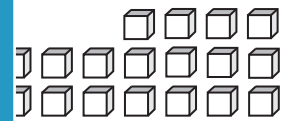


_____ ones

5)

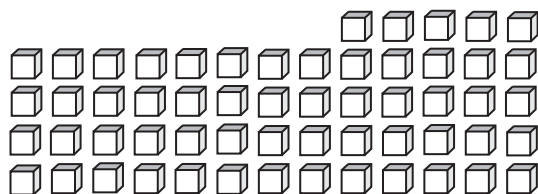


_____ tens



_____ ones

7)



_____ tens _____ ones

8)



_____ tens _____ ones