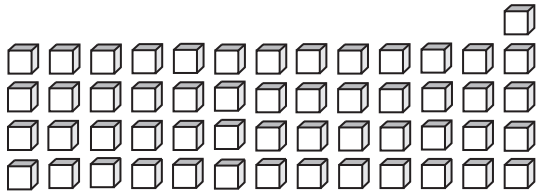


Tens & Ones

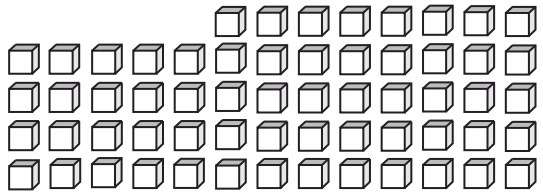
How many tens can you form? Also find the ones that left over.

1)



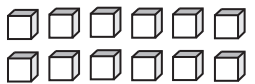
_____ tens _____ ones

2)

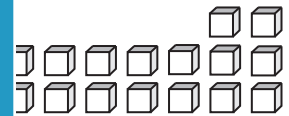


_____ tens _____ ones

3)

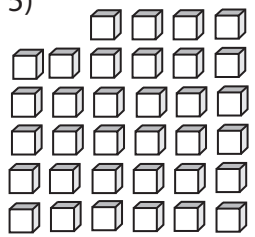


_____ tens

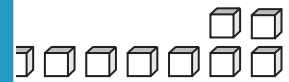


_____ ones

5)



_____ tens



_____ ones

PREVIEW

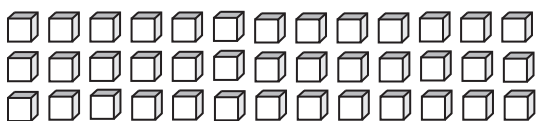
Gain complete access to the largest collection of worksheets in all subjects!

Members, please log in to download this worksheet.

Not a member? Please sign up to gain complete access.

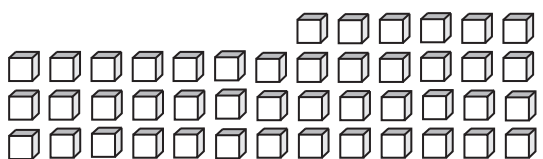
www.mathworksheets4kids.com

7)



_____ tens _____ ones

8)



_____ tens _____ ones

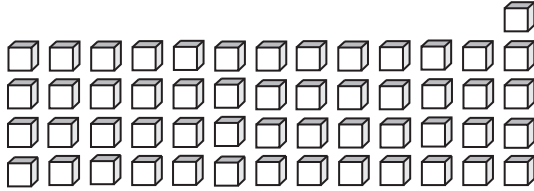
Answer key

Sheet 4

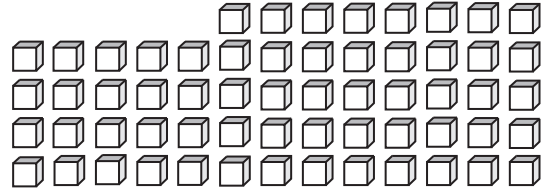
Tens & Ones

How many tens can you form? Also find the ones that left over.

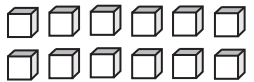
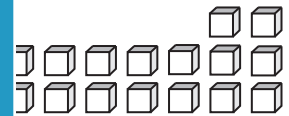
1)

5 tens 3 ones

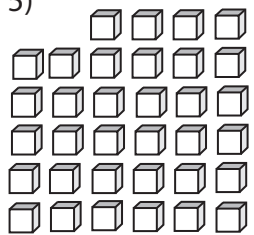
2)

6 tens 0 ones

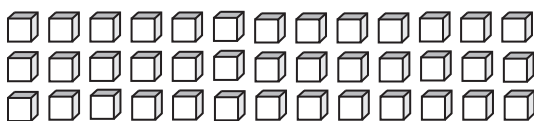
3)

3 tens**PREVIEW**Gain complete access to the largest
collection of worksheets in all subjects!Members, please
log in to
download this
worksheet.Not a member?
Please sign up to
gain complete
access.www.mathworksheets4kids.com8 ones

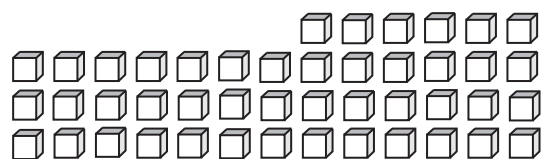
5)

7 tens5 ones

7)

3 tens 9 ones

8)

4 tens 5 ones