

Thousands & Hundreds

How many thousands can you form? Also find the hundreds that left over.

1)

_____ thousands _____ hundreds

2)

_____ thousands _____ hundreds

3)

_____ thousands _____ hundreds

4)

_____ thousands _____ hundreds

5)

_____ thousands _____ hundreds

PREVIEW

Gain complete access to the largest collection of worksheets in all subjects!

Members, please log in to download this worksheet.

Not a member? Please sign up to gain complete access.

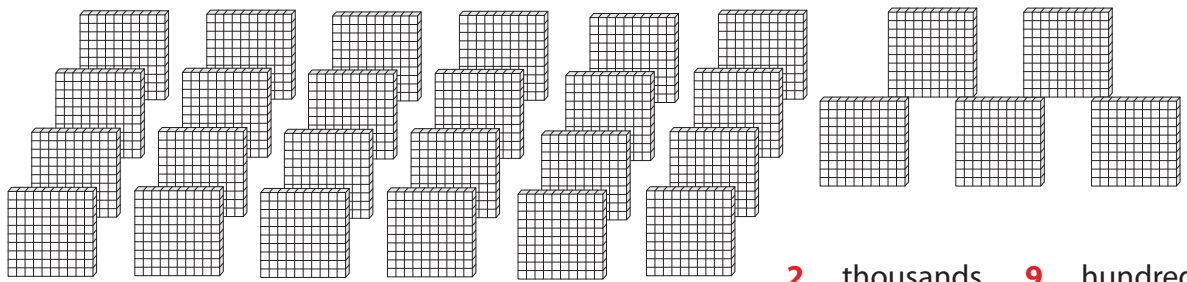
www.mathworksheets4kids.com

Answer key**Thousands & Hundreds**

Sheet 3

How many thousands can you form? Also find the hundreds that left over.

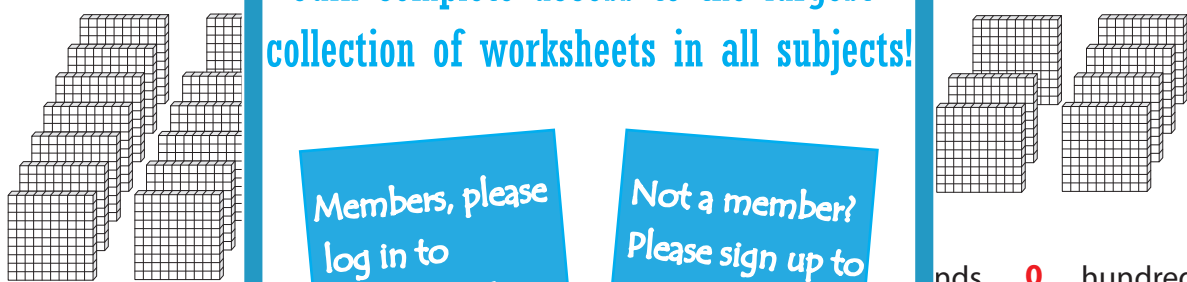
1)



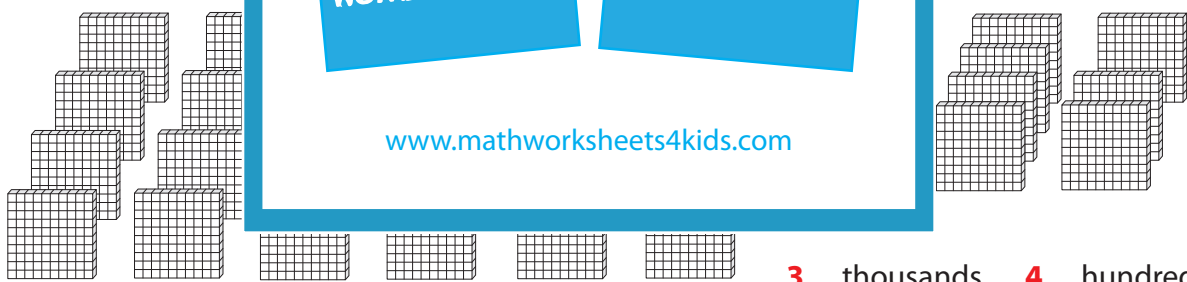
2)




3)



4)



5)



PREVIEW

Gain complete access to the largest collection of worksheets in all subjects!

Members, please log in to download this worksheet.

Not a member? Please sign up to gain complete access.

www.mathworksheets4kids.com