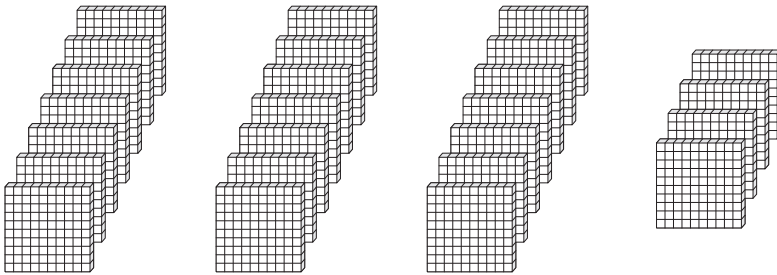


Thousands & Hundreds

How many thousands can you form? Also find the hundreds that left over.

1)



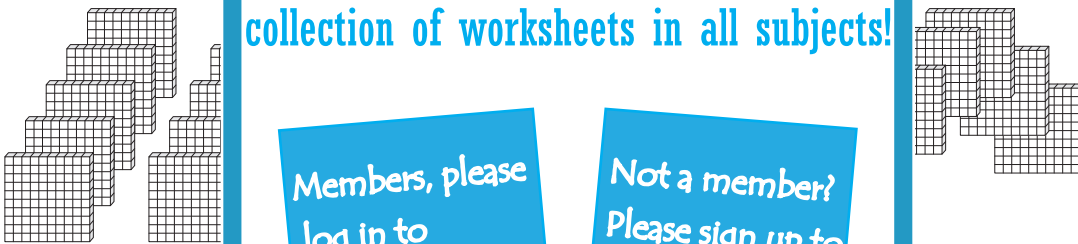
_____ thousands _____ hundreds

2)



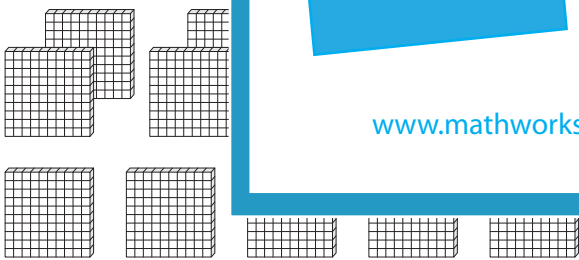
_____ thousands _____ hundreds

3)



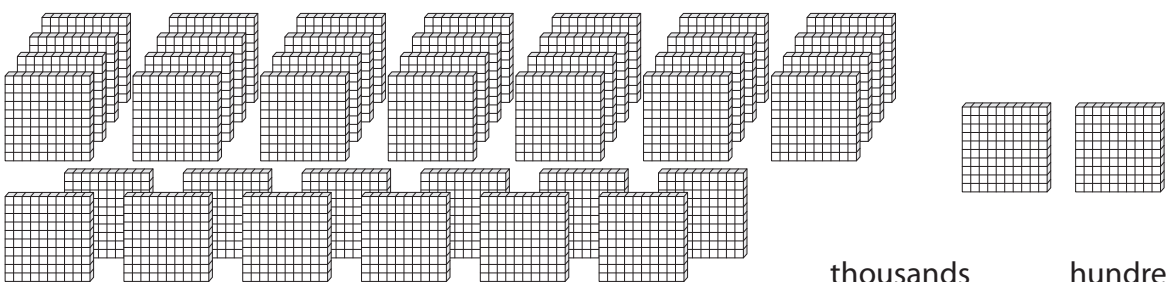
_____ thousands _____ hundreds

4)



_____ thousands _____ hundreds

5)



_____ thousands _____ hundreds

PREVIEW

Gain complete access to the largest collection of worksheets in all subjects!

Members, please log in to download this worksheet.

Not a member? Please sign up to gain complete access.

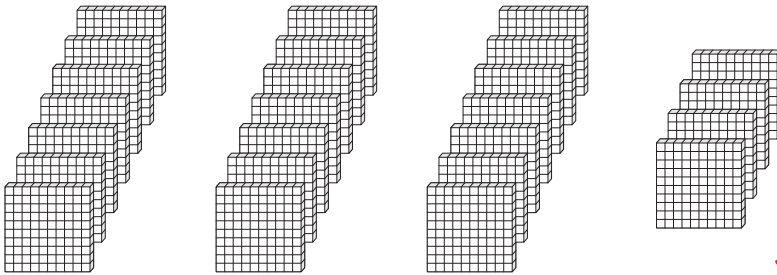
www.mathworksheets4kids.com

Answer key**Thousands & Hundreds**

Sheet 4

How many thousands can you form? Also find the hundreds that left over.


1)

2 thousands 5 hundreds


2)

nds 0 hundreds

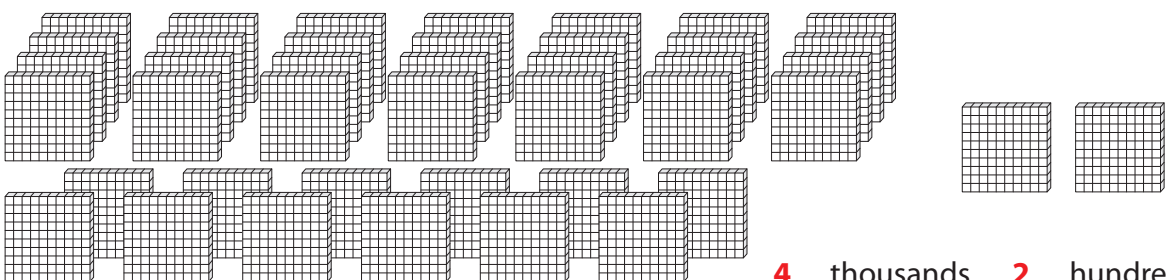
3)

nds 1 hundreds

4)

1 thousands 3 hundreds

5)

4 thousands 2 hundreds**PREVIEW**Gain complete access to the largest
collection of worksheets in all subjects!Members, please
log in to
download this
worksheet.Not a member?
Please sign up to
gain complete
access.www.mathworksheets4kids.com