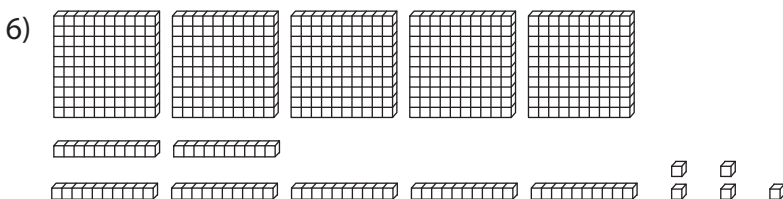
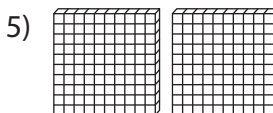
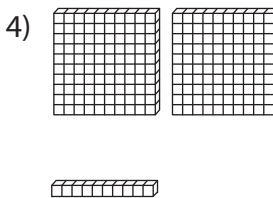
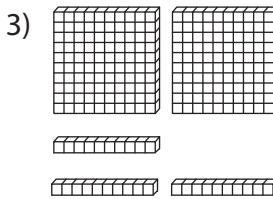
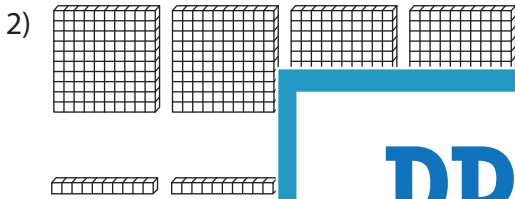
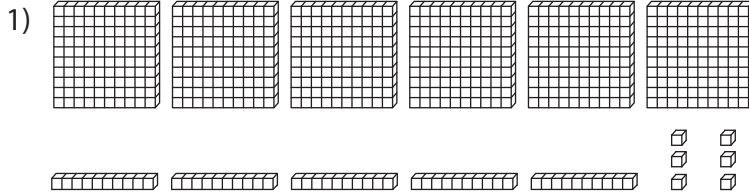


## Place Value Blocks - 3 Digits

L1S2

Write the number formed by base ten blocks.



# PREVIEW

Gain complete access to the largest  
collection of worksheets in all subjects!

Members, please  
log in to  
download this  
worksheet.

Not a member?  
Please sign up to  
gain complete  
access.

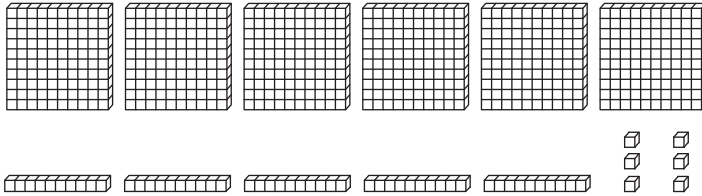
[www.mathworksheets4kids.com](http://www.mathworksheets4kids.com)

**Answer key****Place Value Blocks - 3 Digits**

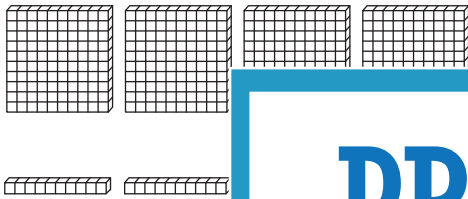
L1S2

Write the number formed by base ten blocks.

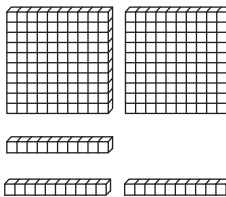
1)

**658**

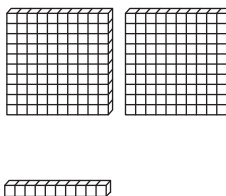
2)

**446**

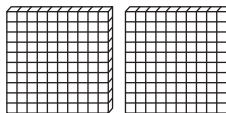
3)

**367**

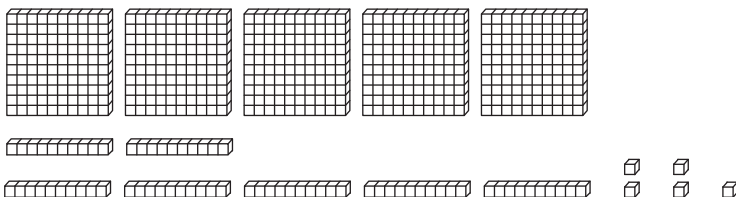
4)

**912**

5)

**700**

6)

**575****PREVIEW**Gain complete access to the largest  
collection of worksheets in all subjects!Members, please  
log in to  
download this  
worksheet.Not a member?  
Please sign up to  
gain complete  
access.[www.mathworksheets4kids.com](http://www.mathworksheets4kids.com)