

Name : _____

Box-and-Whisker Plot

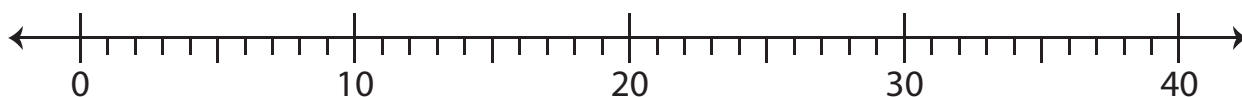
Level 1: S1

Make box-and-whisker plots for the given data.

1) 17, 29, 32, 9, 30, 14, 8, 39, 11, 32, 23

Minimum : _____ Maximum : _____

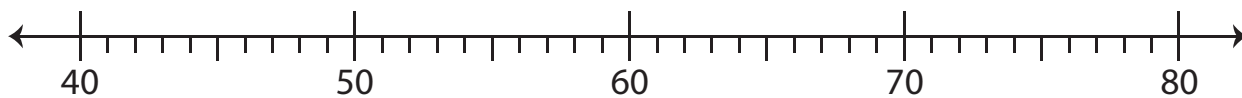
Q_1 : _____ Q_2 : _____ Q_3 : _____



2) 58, 67, 44, 72, 51, 42, 60, 46, 69

Minimum : _____ Maximum : _____

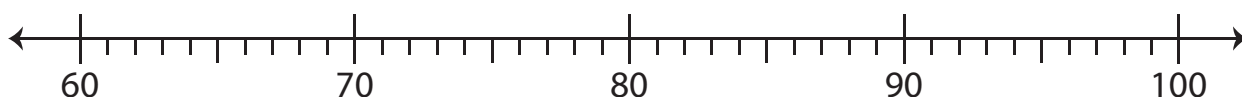
Q_1 : _____ Q_2 : _____ Q_3 : _____



3) 67, 100, 94, 77, 80, 62, 79, 68, 95, 86, 73, 84

Minimum : _____ Maximum : _____

Q_1 : _____ Q_2 : _____ Q_3 : _____



Name : _____

Answer Key

Box-and-Whisker Plot

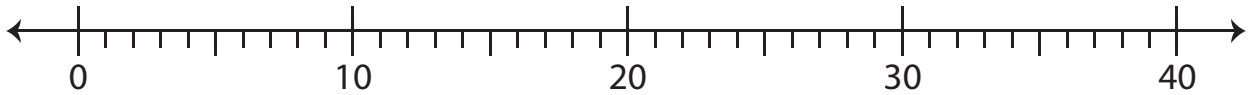
Level 1: S1

Make box-and-whisker plots for the given data.

1) 17, 29, 32, 9, 30, 14, 8, 39, 11, 32, 23

Minimum : 8 Maximum : 39

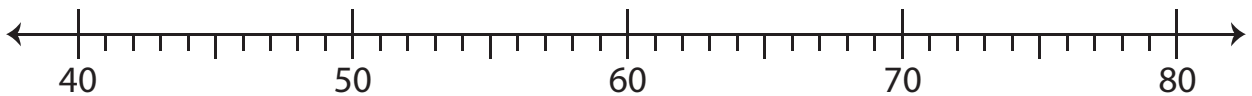
Q_1 : 11 Q_2 : 23 Q_3 : 32



2) 58, 67, 44, 72, 51, 42, 60, 46, 69

Minimum : 42 Maximum : 72

Q_1 : 45 Q_2 : 58 Q_3 : 68



3) 67, 100, 94, 77, 80, 62, 79, 68, 95, 86, 73, 84

Minimum : 62 Maximum : 100

Q_1 : 70.5 Q_2 : 79.5 Q_3 : 90

