

- A) Observe the comparisons and select the appropriate option based on the key provided.

1)

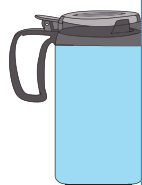
**PREVIEW**☐ Yes ☐ No

2)

Gain complete access to the largest  
collection of worksheets in all subjects!

☐ Yes ☐ No

3)


☐ Yes ☐ No

- B) Based on the liquid in the bottles, determine how many spaces they will fill.

Members, please  
log in to  
download this  
worksheet.


Not a member?  
Please sign up to  
gain complete  
access.

1)



[www.mathworksheets4kids.com](http://www.mathworksheets4kids.com)

2)



=

