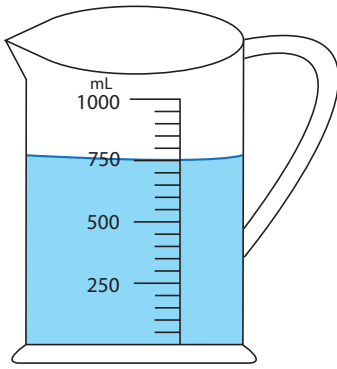


Measuring Jug

Sheet 1

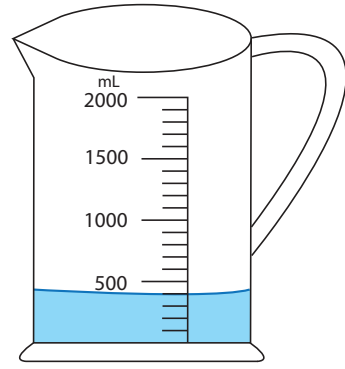
1) If you add 200 mL of water in each jug, what would be the new reading?

a)



_____ mL

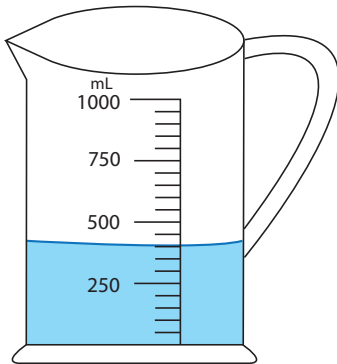
b)



_____ mL

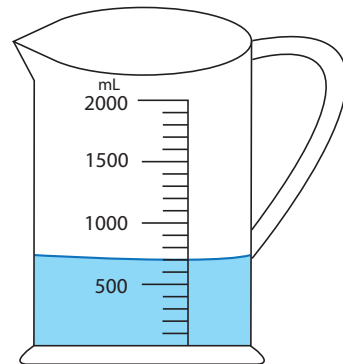
2) How much water required to fill each jug up to 800 mL?

a)



_____ mL

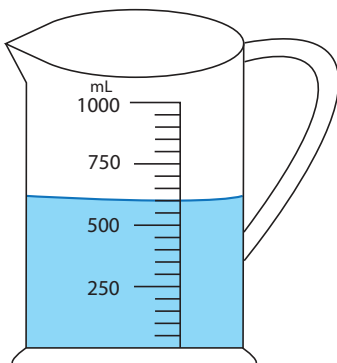
b)



_____ mL

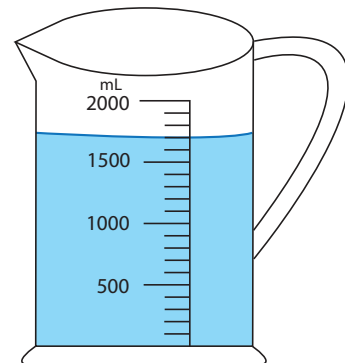
3) How much water should you pour out from each jug to drop down the water level to 300 mL?

a)



_____ mL

b)



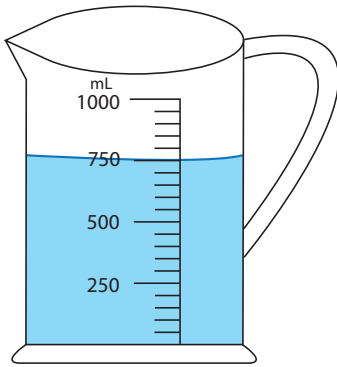
_____ mL

Answer key
Measuring Jug

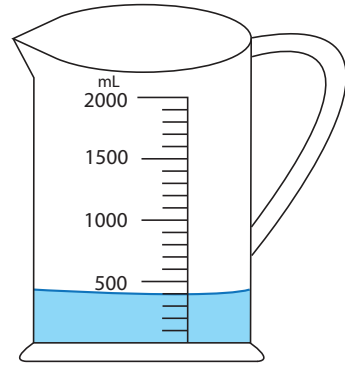
Sheet 1

1) If you add 200 mL of water in each jug, what would be the new reading?

a)

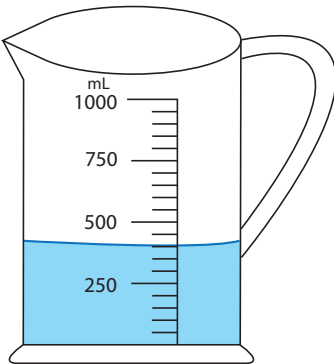
950 mL

b)

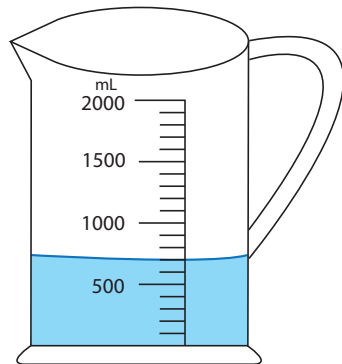
600 mL

2) How much water required to fill each jug up to 800 mL?

a)

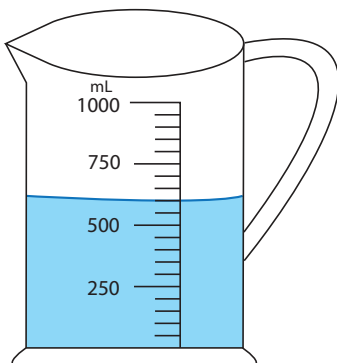
400 mL

b)

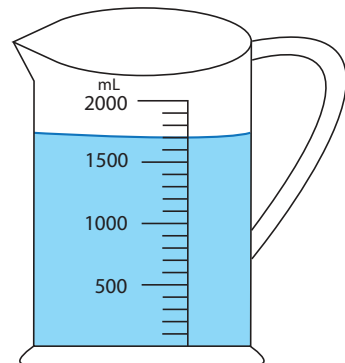
100 mL

3) How much water should you pour out from each jug to drop down the water level to 300 mL?

a)

300 mL

b)

1400 mL