







Name : \_\_\_\_\_

## Full, Half-Full, or Empty

Sheet 1

A) Choose the word that best describes the amount of sauce in each squeeze bottle based on your observation.

1) 	<div>almost empty</div> <div>empty</div>	2) 	<div>almost empty</div> <div>half-empty</div>	3) 	<div>full</div> <div>almost full</div>
4) 	<div>half-empty</div> <div>empty</div>	5) 	<div>half-full</div> <div>full</div>	6) 	<div>half-full</div> <div>almost full</div>




B) Color each jug, filling in the area representing the specified water level.

almost full

half-full

full

almost empty



C) Order the teapots from empty to full.



A



B



C

