



Full, Half-Full, or Empty

A) Choose the word that best describes the volume of water in each bottle based on your observation.



empty

most empty

full

half-empty

PREVIEW

Gain complete access to the largest collection of worksheets in all subjects!

Members, please log in to download this worksheet.


Not a member? Please sign up to gain complete access.

B) Color each jar, filling in the area representing the specified honey level.

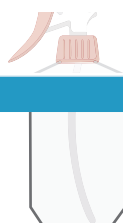
full



half-empty



C) Order the



A

B

C

A



www.mathworksheets4kids.com