


**Capacity - More/Less**

Customary Units: S2

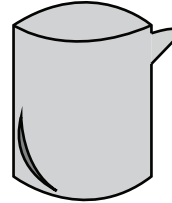
Choose the correct choice that best estimates the capacity of each object.

1)



- Less than 10 gallons
- More than 10 gallons

2)



- Less than 2 fluid ounces
- More than 2 fluid ounces

3)



- Less than 1 pint
- More than 1 pint



1 pint  
1 pint

5)




- Less than 1 cup
- More than 1 cup



1 cup  
1 cup

7)



- Less than 2 gallons
- More than 2 gallons

8)



- Less than 10 fluid ounces
- More than 10 fluid ounces

**PREVIEW**

Gain complete access to the largest collection of worksheets in all subjects!

Members, please log in to download this worksheet.

Not a member? Please sign up to gain complete access.

[www.mathworksheets4kids.com](http://www.mathworksheets4kids.com)


**Answer key**

**Capacity - More/Less**

Customary Units: S2

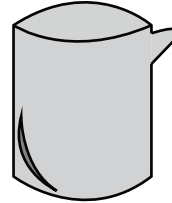
Choose the correct choice that best estimates the capacity of each object.

1)



- Less than 10 gallons
- More than 10 gallons

2)



- Less than 2 fluid ounces
- More than 2 fluid ounces

3)




- Less than 1 pint
- More than 1 pint

5)



- Less than 1 cup
- More than 1 cup

7)



- Less than 2 gallons
- More than 2 gallons

8)



- Less than 10 fluid ounces
- More than 10 fluid ounces

**PREVIEW**

Gain complete access to the largest collection of worksheets in all subjects!

Members, please log in to download this worksheet.

Not a member? Please sign up to gain complete access.

[www.mathworksheets4kids.com](http://www.mathworksheets4kids.com)