

Capacity - More/Less

Metric Units: S2

Choose the correct choice that best estimates the capacity of each object.

1)



- Less than 10 mL
 More than 10 mL

2)



- Less than 1 L
 More than 1 L

3)



- Less than
 More than

PREVIEW


Gain complete access to the largest
collection of worksheets in all subjects!

Members, please
log in to
download this
worksheet.

Not a member?
Please sign up to
gain complete
access.

www.mathworksheets4kids.com

5)




- Less than
 More than

7)



- Less than 1 L
 More than 1 L

8)



- Less than 3 mL
 More than 3 mL

Answer key

Capacity - More/Less

Metric Units: S2

Choose the correct choice that best estimates the capacity of each object.

1)



- Less than 10 mL
- More than 10 mL

2)



- Less than 1 L
- More than 1 L

3)



- Less than 100 mL
- More than 100 mL



- 100 mL
- 1000 mL

5)



- Less than 1 L
- More than 1 L


- 1 L
- 10 L

7)



- Less than 1 L
- More than 1 L

8)



- Less than 3 mL
- More than 3 mL

PREVIEW

Gain complete access to the largest collection of worksheets in all subjects!

Members, please log in to download this worksheet.

Not a member? Please sign up to gain complete access.

www.mathworksheets4kids.com