


## Measuring Capacity

Metric Units: S1

Calculate the capacity.


1)

Capacity of each  = \_\_\_\_\_ mL


2)

Capacity of each  = \_\_\_\_\_ mL

3)

Capacity of each  = \_\_\_\_\_ L

4)

Capacity of each  = \_\_\_\_\_ mL

5)


Capacity of each  = \_\_\_\_\_ mL

**Answer key****Measuring Capacity**

Metric Units: S1

Calculate the capacity.


1)

Capacity of each  = 250 mL


2)

Capacity of each  = 50 mL

3)

Capacity of each  = 2 L

4)

Capacity of each  = 500 mL

5)

Capacity of each  = 25 mL