

Name : \_\_\_\_\_

# Picture Subtraction



A Count and subtract.

1)



2)




3)




B Write the subtraction sentence to represent each picture model.

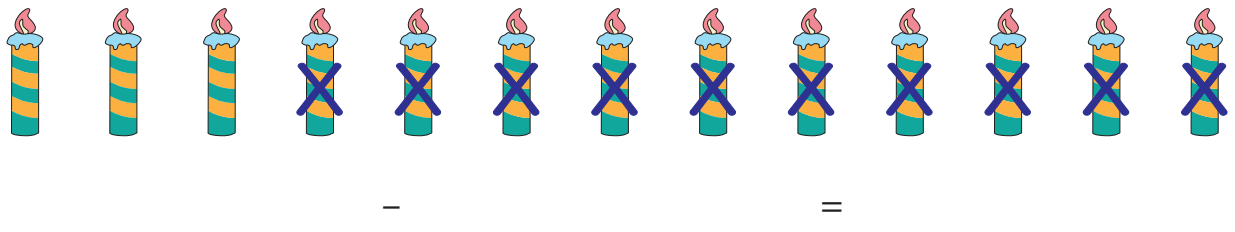
1)



2)



3)



Name : \_\_\_\_\_

Answer key

# Picture Subtraction



A Count and subtract.

1)

$$\begin{array}{c} \text{5 Santa hats} \\ - \text{2 Santa hats} \\ \hline \end{array} = \boxed{3}$$

2)

$$\begin{array}{c} \text{12 blue ornaments} \\ - \text{11 blue ornaments} \\ \hline \end{array} = \boxed{1}$$

3)

$$\begin{array}{c} \text{9 green stockings} \\ - \text{4 green stockings} \\ \hline \end{array} = \boxed{5}$$

B Write the subtraction sentence to represent each picture model.

1)

$$\begin{array}{c} \text{9 cakes} \\ - \text{3 cakes} \\ \hline \end{array} = \underline{\quad 6 \quad}$$

2)

$$\begin{array}{c} \text{8 gifts} \\ - \text{4 gifts} \\ \hline \end{array} = \underline{\quad 4 \quad}$$

3)

$$\begin{array}{c} \text{13 candles} \\ - \text{10 candles} \\ \hline \end{array} = \underline{\quad 3 \quad}$$