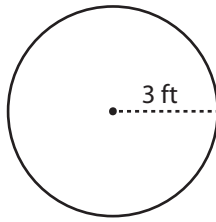


Name : _____

Circle - Area

Radius: ES2

Example :



$$\text{Area of a circle} = \pi r^2$$

$$\text{Radius } (r) = 3 \text{ ft}$$

$$\text{Area} = \pi r^2$$

$$= \pi \times 3 \times 3$$

$$\text{Area} = \mathbf{9\pi \text{ ft}^2}$$

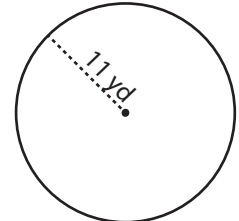
Find the area of each circle in terms of π .

1)



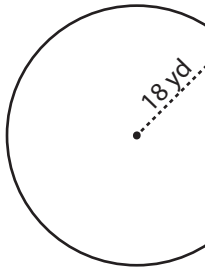
Area =

2)



Area =

4)



Area =

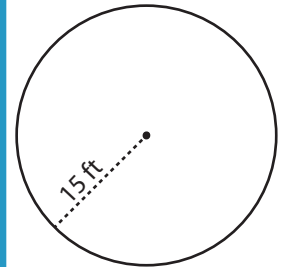
PREVIEW

Gain complete access to the largest collection of worksheets in all subjects!

Members, please log in to download this worksheet.

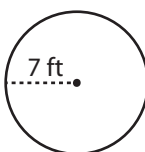
Not a member? Please sign up to gain complete access.

www.mathworksheets4kids.com



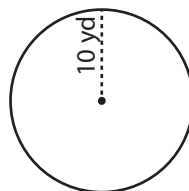
Area =

7)



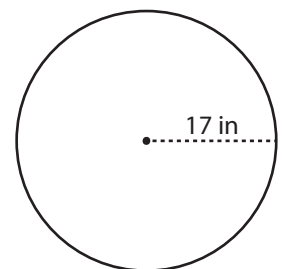
Area =

8)



Area =

9)



Area =

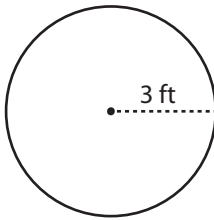
Name : _____

Answer key

Circle - Area

Radius: ES2

Example :



$$\text{Area of a circle} = \pi r^2$$

$$\text{Radius } (r) = 3 \text{ ft}$$

$$\text{Area} = \pi r^2$$

$$= \pi \times 3 \times 3$$

$$\text{Area} = \mathbf{9\pi \text{ ft}^2}$$

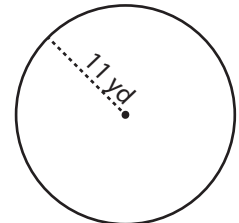
Find the area of each circle in terms of π .

1)



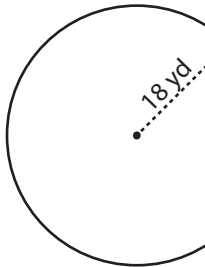
Area = $\mathbf{196\pi \text{ in}^2}$

2)



Area = $\mathbf{121\pi \text{ yd}^2}$

4)



Area = $\mathbf{324\pi \text{ yd}^2}$


PREVIEW

Gain complete access to the largest collection of worksheets in all subjects!

Members, please log in to download this worksheet.

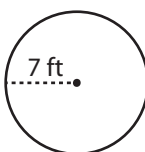
Not a member? Please sign up to gain complete access.

www.mathworksheets4kids.com



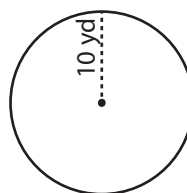
Area = $\mathbf{225\pi \text{ ft}^2}$

7)



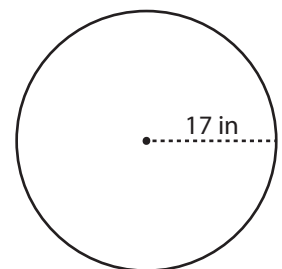
Area = $\mathbf{49\pi \text{ ft}^2}$

8)



Area = $\mathbf{100\pi \text{ yd}^2}$

9)



Area = $\mathbf{289\pi \text{ in}^2}$