

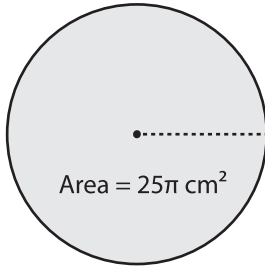
Name : _____

Circumference

ES1

Find the circumference of each circle in terms of π .

1)

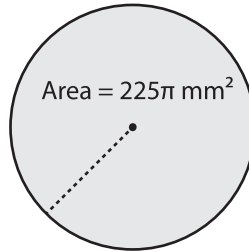


Radius = _____

Diameter = _____

Circumference = _____

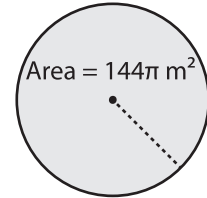
2)



Radius = _____

Diameter = _____

3)

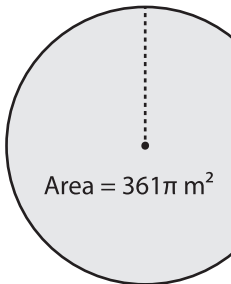


Radius = _____

Diameter = _____

Circumference = _____

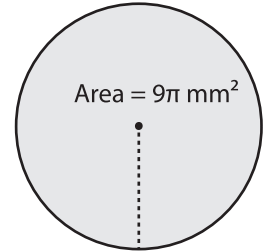
4)



Radius = _____

Diameter = _____

Circumference = _____



Radius = _____

Diameter = _____

Circumference = _____

PREVIEW

Gain complete access to the largest collection of worksheets in all subjects!

Members, please log in to download this worksheet.

Not a member? Please sign up to gain complete access.

www.mathworksheets4kids.com

7) A round dinner table in terms of

circumference of the dinner

Circumference = _____

8) If a cookie occupies the area $49\pi \text{ mm}^2$, what will be the circumference of the cookie in terms of π ?

Circumference = _____