

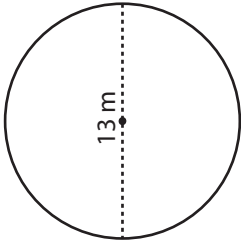
Name : \_\_\_\_\_

Radius/Diameter: ES1

## Circle - Circumference

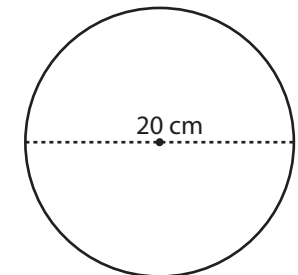
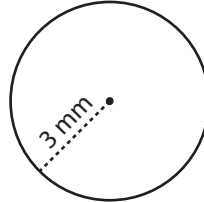
Find the circumference of each circle in terms of  $\pi$ .

1)



Circumference = \_\_\_\_\_

2)

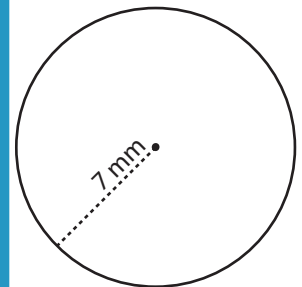


Circumference = \_\_\_\_\_

4)



Circumference = \_\_\_\_\_



Circumference = \_\_\_\_\_

**PREVIEW**

Gain complete access to the largest collection of worksheets in all subjects!

Members, please log in to download this worksheet.

Not a member? Please sign up to gain complete access.

[www.mathworksheets4kids.com](http://www.mathworksheets4kids.com)

7) A bike wheel has

the wheel in terms of  $\pi$ ?

Circumference = \_\_\_\_\_

8) A minute-hand of a clock is 16 mm long. Find the distance traveled by the tip of the minute-hand in one hour. Express your answer in terms of  $\pi$ .

Circumference = \_\_\_\_\_